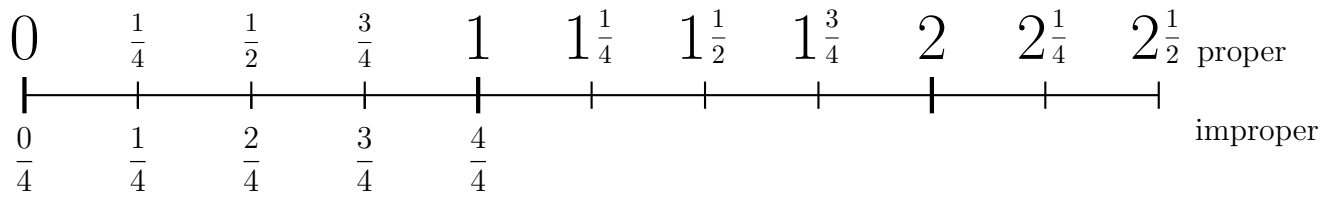
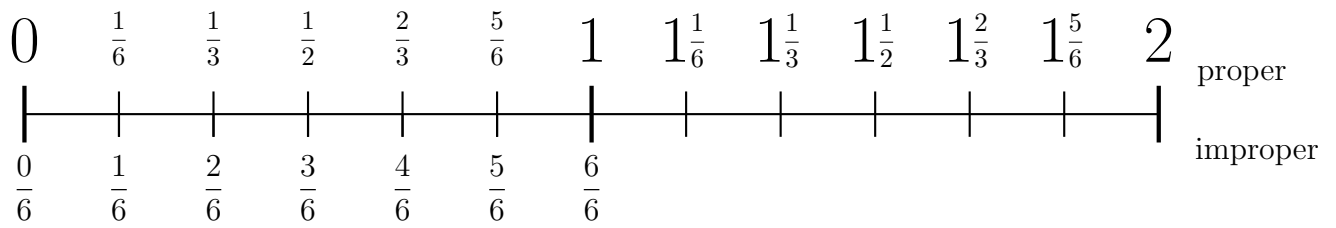


1. Complete the labels of the improper fractions on this number line.



2. Write $\frac{10}{6}$ as a proper fraction.

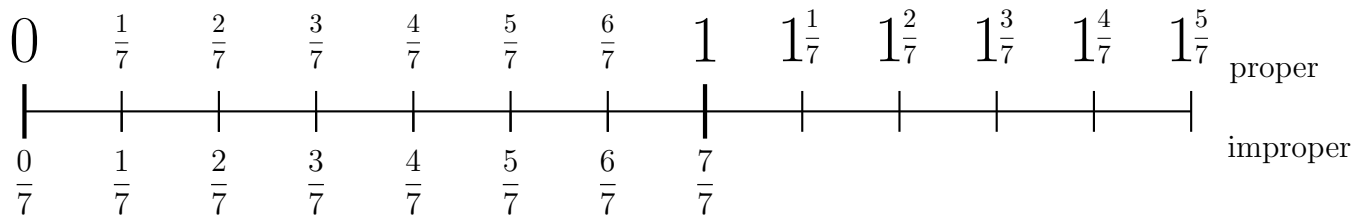
You may use this number line.



2.

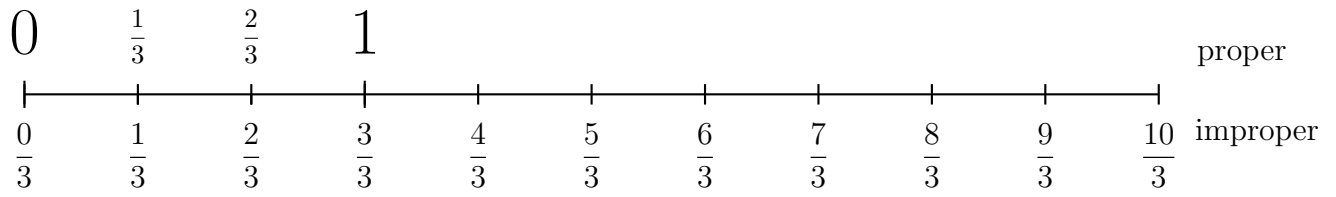
3. Write $1\frac{4}{7}$ as an improper fraction.

You may use this number line.



3.

4. You may use this number line.



(a) Write $\frac{5}{3}$ as a proper fraction.

4.

(b) Write 3 as an improper fraction.

4.

Answers

1. $\frac{5}{4}, \frac{6}{4}, \frac{7}{4}, \frac{8}{4}, \frac{9}{4}, \frac{10}{4}$

2. $1\frac{2}{3}$

3. $\frac{11}{7}$

4. (a) $1\frac{2}{3}$

(b) $\frac{9}{3}$