


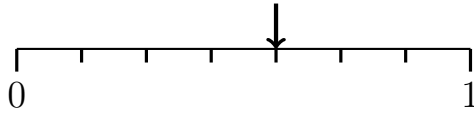
1. A probability is shown on this probability line with a cross.



Write down the probability shown as a fraction.

1.

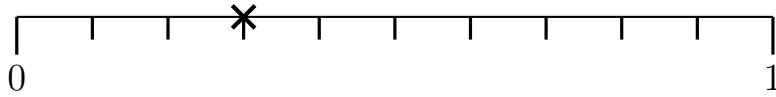
2. A probability is shown on this probability line with an arrow.



Write down the probability shown as a fraction.

2.

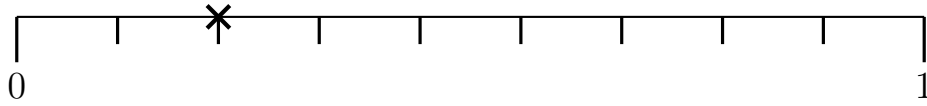
3. A probability is shown on this probability line with a cross.



Write down the probability shown as a fraction.

3.

4. A probability is shown on this probability line with a cross.



Write down the probability shown as a fraction.

4.

Answers

1. $\frac{1}{3}$

2. $\frac{4}{7}$

3. $\frac{3}{10}$

4. $\frac{2}{9}$