




1. Shade in $\frac{1}{6}$ of this rectangle.



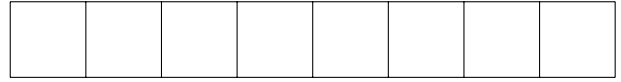
2. Shade in $\frac{1}{3}$ of this rectangle.



3. Shade in $\frac{1}{5}$ of this rectangle.



4. Shade in $\frac{1}{8}$ of this rectangle.



Answers

1. $\frac{1}{6}$ is shaded
2. $\frac{1}{3}$ is shaded
3. $\frac{1}{5}$ is shaded
4. $\frac{1}{8}$ is shaded