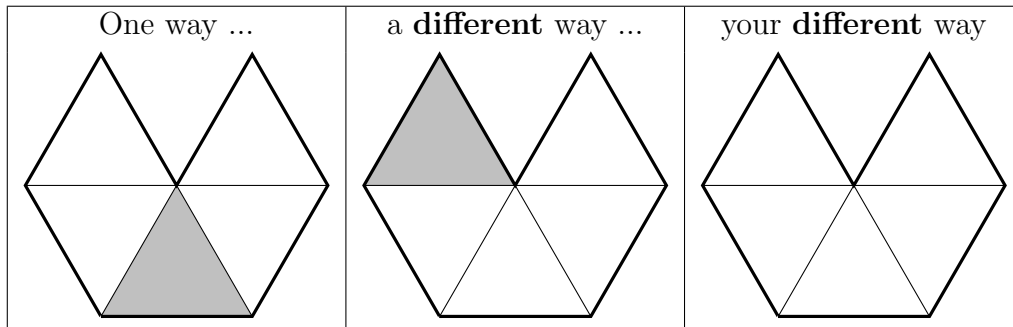


1. The teacher said “Shade $\frac{1}{5}$ of this shape in **different** ways.”

Here are two **different** ways.

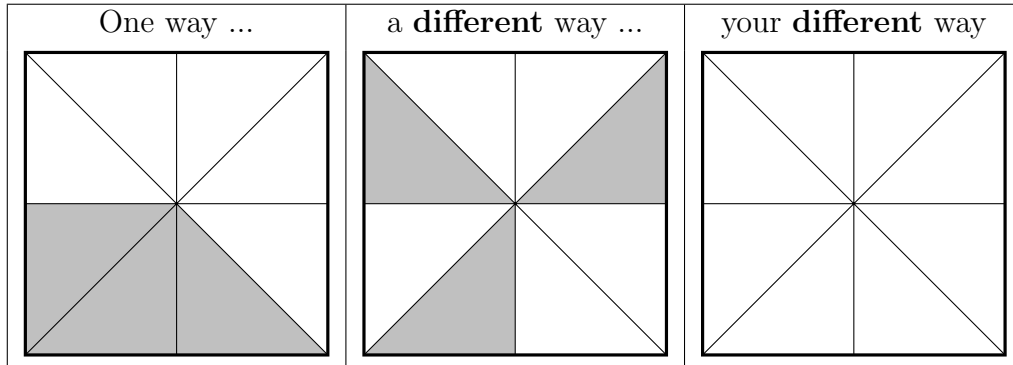
Complete another **different** way.



2. The teacher said “Shade $\frac{3}{8}$ of this shape in **different** ways.”

Here are two **different** ways.

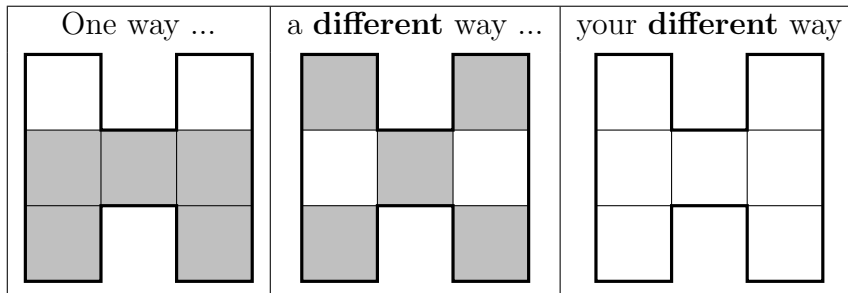
Complete another **different** way.



3. The teacher said “Shade $\frac{5}{7}$ of this shape in **different** ways.”

Here are two **different** ways.

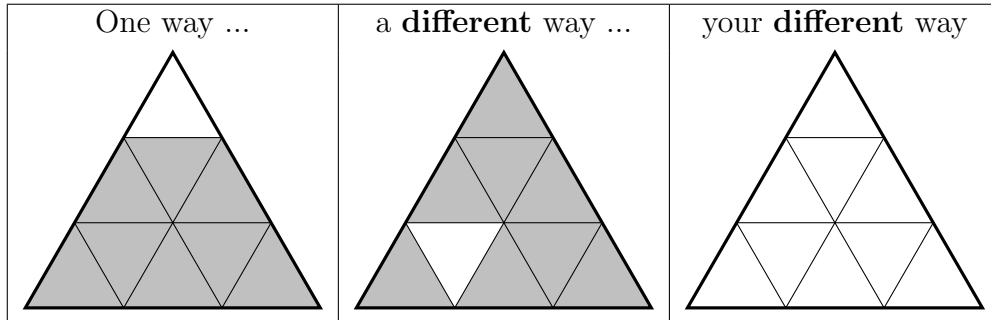
Complete another **different** way.



4. The teacher said “Shade $\frac{8}{9}$ of this shape in **different** ways.”

Here are two **different** ways.

Complete another **different** way.



Answers

1. $\frac{1}{5}$ shaded in a different way
2. $\frac{3}{8}$ shaded in a different way
3. $\frac{5}{7}$ shaded in a different way
4. $\frac{8}{9}$ shaded in a different way