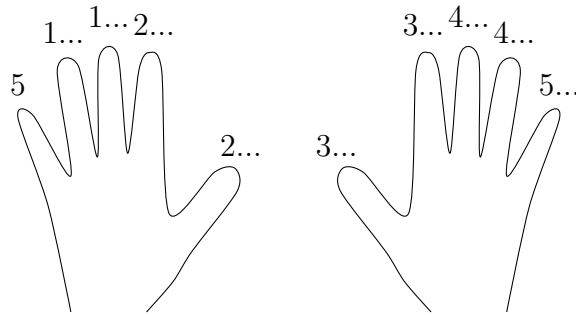
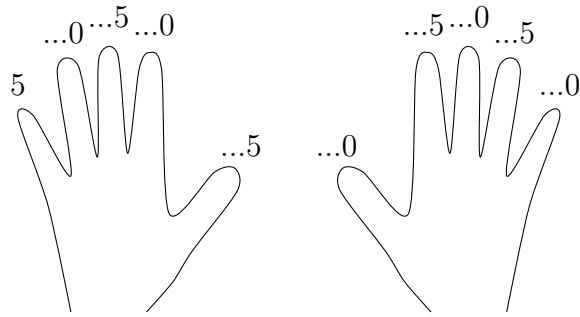


1. Some people like to use their fingers and thumbs to count on in multiples of 5.



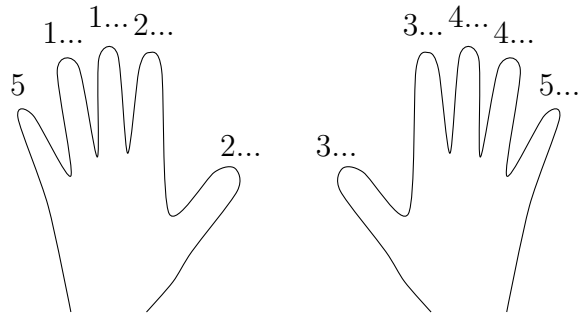
Complete $20 \div 5 = \dots$

2. Some people like to use their fingers and thumbs to count on in multiples of 5.



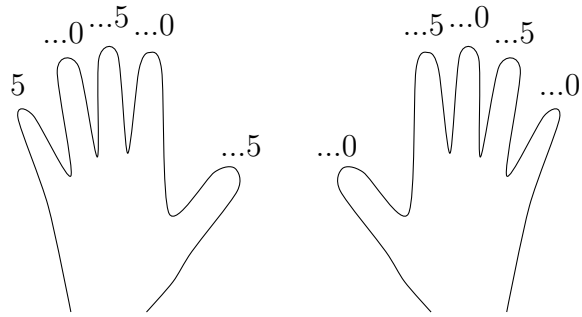
Complete $35 \div 5 = \dots$

3. Some people like to use their fingers and thumbs to count on in multiples of 5.



Complete $50 \div 5 = \dots$

4. Some people like to use their fingers and thumbs to count on in multiples of 5.



Complete $25 \div 5 = \dots$

Answers

1. 4

2. 7

3. 10

4. 5