

1. Complete the calculations

<p><math>70 \div 10 = 7</math></p>	<p><math>40 \div 10 = \dots</math></p>	<p><math>80 \div 10 = \dots</math></p>
<p><math>90 \div 10 = \dots</math></p>	<p><math>60 \div 10 = \dots</math></p>	<p><math>30 \div 10 = \dots</math></p>

numberDIV10etc (1) Q1:

7	4	8
9	6	3

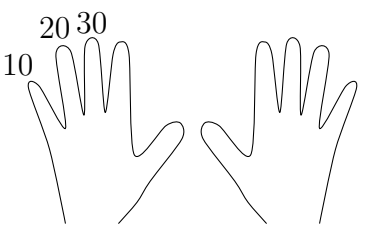
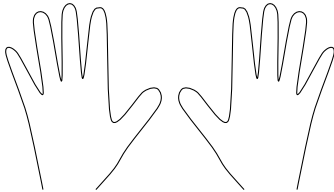
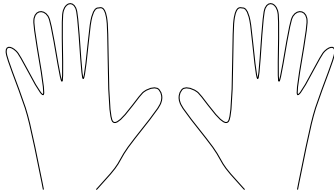
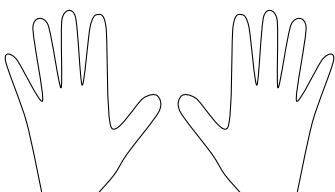
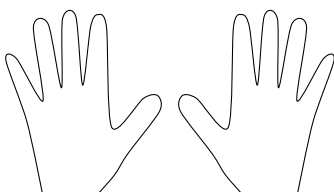
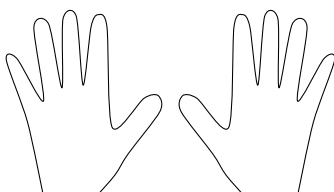
Q2:

3	6	8
7	9	5

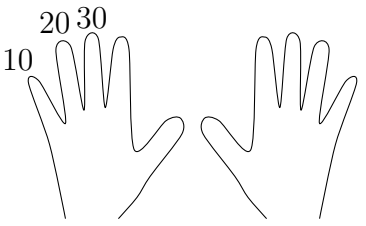
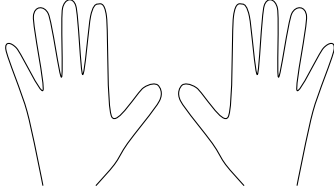
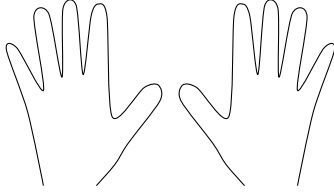
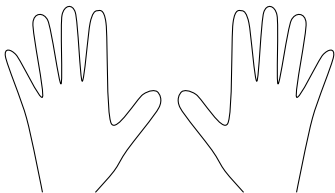
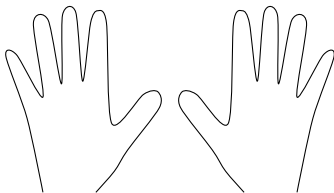
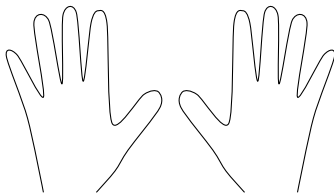
1. Complete the calculations

<p><math>70 \div 10 = 7</math></p>	<p><math>40 \div 10 = \dots</math></p>	<p><math>80 \div 10 = \dots</math></p>
<p><math>90 \div 10 = \dots</math></p>	<p><math>60 \div 10 = \dots</math></p>	<p><math>30 \div 10 = \dots</math></p>

## 2. Complete the calculations

 <p><math>30 \div 10 = 3</math></p>	 <p><math>60 \div 10 = \dots</math></p>	 <p><math>80 \div 10 = \dots</math></p>
 <p><math>70 \div 10 = \dots</math></p>	 <p><math>90 \div 10 = \dots</math></p>	 <p><math>50 \div 10 = \dots</math></p>

## 2. Complete the calculations

 <p><math>30 \div 10 = 3</math></p>	 <p><math>60 \div 10 = \dots</math></p>	 <p><math>80 \div 10 = \dots</math></p>
 <p><math>70 \div 10 = \dots</math></p>	 <p><math>90 \div 10 = \dots</math></p>	 <p><math>50 \div 10 = \dots</math></p>