
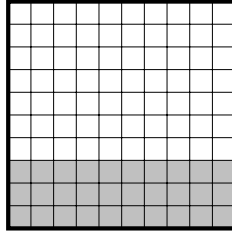


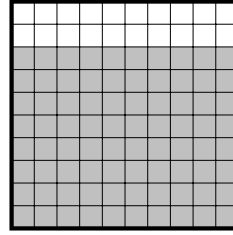
1. Complete these calculations.



$$6 \times 10 = \dots$$



$$10 \times 3 = \dots$$



$$10 \times 8 = \dots$$

2. Write down the value of 2×10

2.

3. Complete this calculation $10 \times 9 = \dots$

4. Write down the value of 7×10

4.

Answers

1. 60, 30, 80
2. 20
3. 90
4. 70