


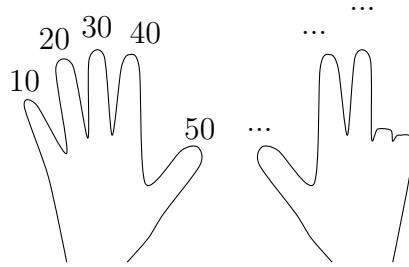
1. Complete the calculation

$$4 \times 10 = \dots$$



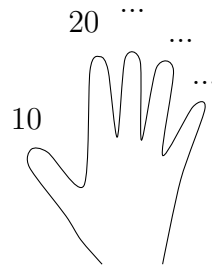
2. Complete the calculation

$$8 \times 10 = \dots$$

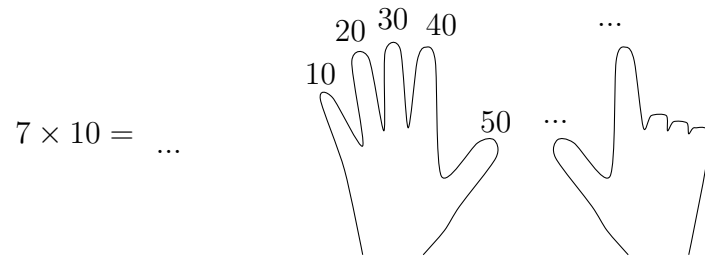


3. Complete the calculation

$$5 \times 10 = \dots$$



4. Complete the calculation



Answers

1. 40
2. 80
3. 50
4. 70