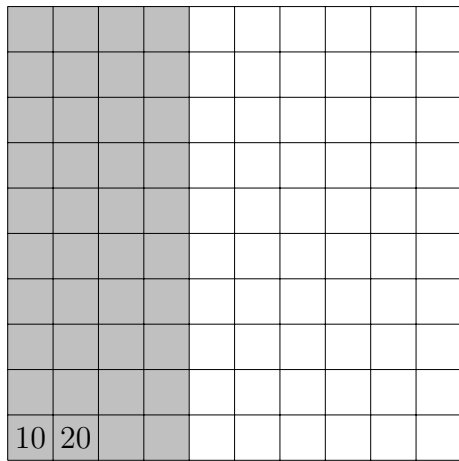


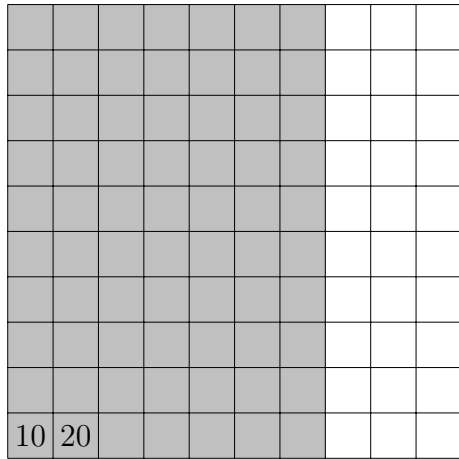
1. Use multiples of 10 to make counting the shaded squares quicker.



How many small squares are shaded in?

1.

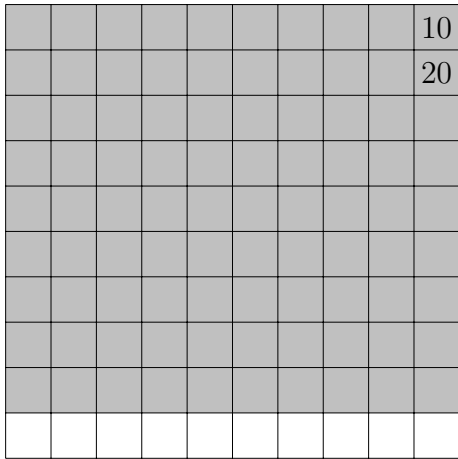
2. Use multiples of 10 to make counting the shaded squares quicker.



How many small squares are shaded in?

2.

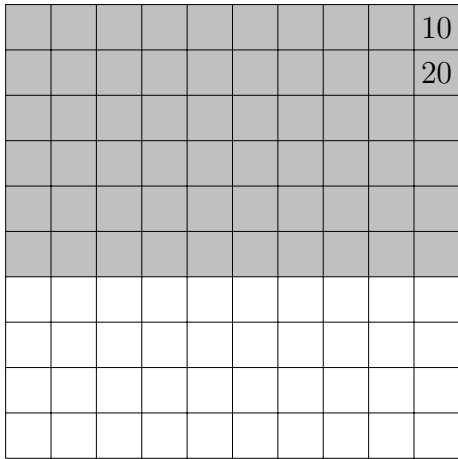
3. Use multiples of 10 to make counting the shaded squares quicker.



How many small squares are shaded in?

3.

4. Use multiples of 10 to make counting the shaded squares quicker.



How many small squares are shaded in?

4.

Answers

1. 40
2. 70
3. 90

4.