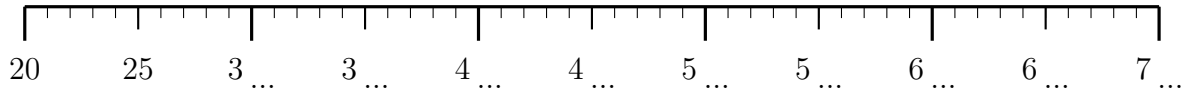


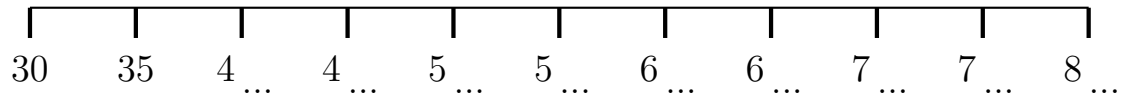
1. Complete these multiples of 5 shown on a ruler.



2. Complete the multiples of 5

25	30	... 5	... 0	... 5	... 0	... 5	... 0	... 5	... 0	... 5
----	----	-------	-------	-------	-------	-------	-------	-------	-------	-------

3. Complete the multiples of 5 on the number line.



4. Complete the multiples of 5

35	40	4 ...	5 ...	5 ...	6 ...	6 ...	7 ...	7 ...	8 ...	8 ...
----	----	-------	-------	-------	-------	-------	-------	-------	-------	-------

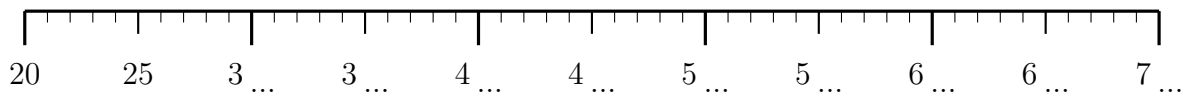
Q1: 30, 35, 40, 45, 50, 55, 60, 65, 70 Q2: 35, 40, 45, 50, 55, 60, 65, 70, 75

sequence Q3: 40, 45, 50, 55, 60, 65, 70, 75, 80 Q4: 45, 50, 55, 60, 65, 70, 75, 80, 85

multiple(6) Q5: 50, 55, 60, 65, 70, 75, 80, 85, 90 Q6: 45, 50, 55, 60, 65, 70, 75, 80, 85

Q7: 25, 30, 35, 40, 45, 50, 55, 60, 65 Q8: 20, 25, 30, 35, 40, 45, 50, 55, 60

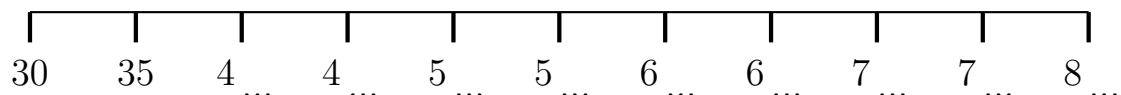
1. Complete these multiples of 5 shown on a ruler.



2. Complete the multiples of 5

25	30	... 5	... 0	... 5	... 0	... 5	... 0	... 5	... 0	... 5
----	----	-------	-------	-------	-------	-------	-------	-------	-------	-------

3. Complete the multiples of 5 on the number line.



4. Complete the multiples of 5

35	40	4 ...	5 ...	5 ...	6 ...	6 ...	7 ...	7 ...	8 ...	8 ...
----	----	-------	-------	-------	-------	-------	-------	-------	-------	-------

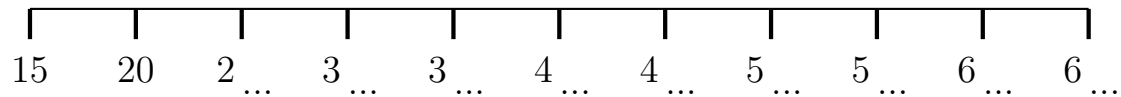
5. Complete these multiples of 5 shown on a ruler.



6. Complete the multiples of 5

35	40	... 5	... 0	... 5	... 0	... 5	... 0	... 5	... 0	... 5
----	----	-------	-------	-------	-------	-------	-------	-------	-------	-------

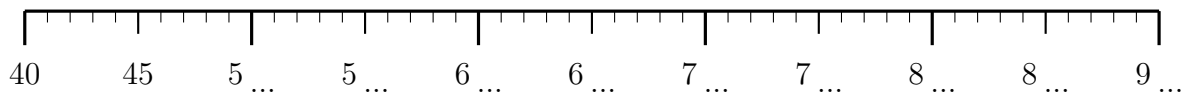
7. Complete the multiples of 5 on the number line.



8. Complete these multiples of 5

10 15 2... 2... 3... 3... 4... 4... 5... 5... 6...

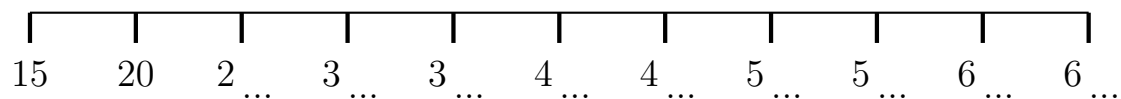
5. Complete these multiples of 5 shown on a ruler.



6. Complete the multiples of 5

35	40	... 5	... 0	... 5	... 0	... 5	... 0	... 5	... 0	... 5
----	----	-------	-------	-------	-------	-------	-------	-------	-------	-------

7. Complete the multiples of 5 on the number line.



8. Complete these multiples of 5

10 15 2... 2... 3... 3... 4... 4... 5... 5... 6...