


1. Write down these multiples of 5



2. Write down these multiples of 2



3. Write down these multiples of 2

• •

.....

• •  
• •

.....

• •  
• •  
• •

.....

• •  
• •  
• •  
• •

.....

• •  
• •  
• •  
• •  
• •

.....


• •  
• •  
• •  
• •  
• •  
• •

.....


4. Write down these multiples of 5




.....




.....



.....



.....




.....

## Answers

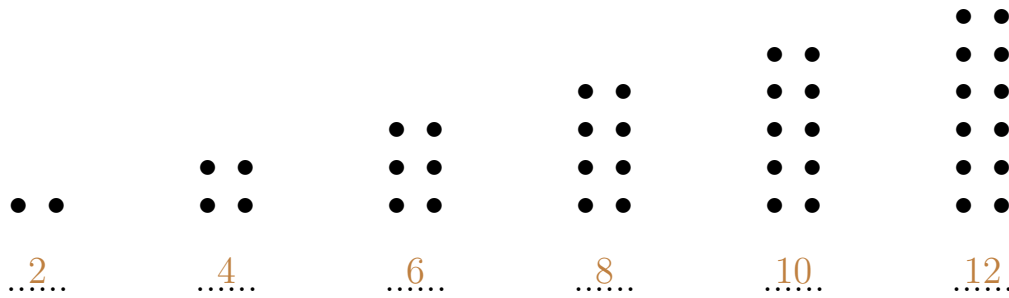
1. multiples of 5



2. multiples of 2



3. multiples of 2



4. multiples of 5

