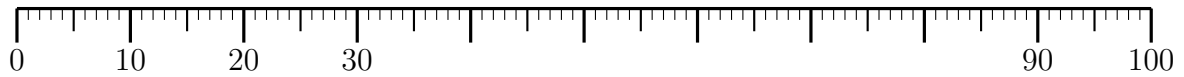


1. Here are some multiples of 10 shown on a ruler



Write these multiples of 10 in the correct places in

(i) the 100 square

1	2	3	4	5	6	7	8	9	
11	12	13	14	15	16	17	18	19	
21	22	23	24	25	26	27	28	29	
31	32	33	34	35	36	37	38	39	40
41	42	43	44	45	46	47	48	49	50
51	52	53	54	55	56	57	58	59	60
61	62	63	64	65	66	67	68	69	70
71	72	73	74	75	76	77	78	79	80
81	82	83	84	85	86	87	88	89	
91	92	93	94	95	96	97	98	99	

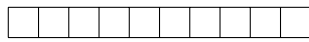
(ii) the multiplication square

×	2	3	4	5	6	7	8	9	
2	4	6	8	10	12	14	16	18	
3	6	9	12	15	18	21	24	27	
4	8	12	16	20	24	28	32	36	40
5	10	15	20	25	30	35	40	45	50
6	12	18	24	30	36	42	48	54	60
7	14	21	28	35	42	49	56	63	70
8	16	24	32	40	48	56	64	72	80
9	18	27	36	45	54	63	72	81	
			40	50	60	70	80		

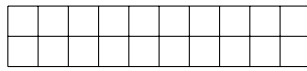
(iii) Complete the 5 missing multiples of 10 in the sequence below

10 20 30 90 100

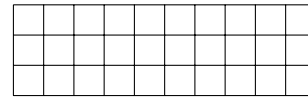
2. Here are some pictures of multiples of 10



10



20



30

Write these multiples of 10 in the correct places in

(i) the 100 square

1	2	3	4	5	6	7	8	9	
11	12	13	14	15	16	17	18	19	
21	22	23	24	25	26	27	28	29	
31	32	33	34	35	36	37	38	39	40
41	42	43	44	45	46	47	48	49	50
51	52	53	54	55	56	57	58	59	60
61	62	63	64	65	66	67	68	69	70
71	72	73	74	75	76	77	78	79	80
81	82	83	84	85	86	87	88	89	90
91	92	93	94	95	96	97	98	99	100


(ii) the multiplication square

×	2	3	4	5	6	7	8	9	
2	4	6	8	10	12	14	16	18	
3	6	9	12	15	18	21	24	27	
4	8	12	16	20	24	28	32	36	40
5	10	15	20	25	30	35	40	45	50
6	12	18	24	30	36	42	48	54	60
7	14	21	28	35	42	49	56	63	70
8	16	24	32	40	48	56	64	72	80
9	18	27	36	45	54	63	72	81	90
			40	50	60	70	80	90	100

(iii) Complete the next 7 multiples of 10 in the sequence below

10 20 30

3. Here are some pictures of multiples of 10



10

20

30

40

50

60

70

Write these multiples of 10 in the correct places in

(i) the 100 square

1	2	3	4	5	6	7	8	9	
11	12	13	14	15	16	17	18	19	
21	22	23	24	25	26	27	28	29	
31	32	33	34	35	36	37	38	39	
41	42	43	44	45	46	47	48	49	
51	52	53	54	55	56	57	58	59	
61	62	63	64	65	66	67	68	69	
71	72	73	74	75	76	77	78	79	80
81	82	83	84	85	86	87	88	89	90
91	92	93	94	95	96	97	98	99	100

(ii) the multiplication square

×	2	3	4	5	6	7	8	9	
2	4	6	8	10	12	14	16	18	
3	6	9	12	15	18	21	24	27	
4	8	12	16	20	24	28	32	36	
5	10	15	20	25	30	35	40	45	
6	12	18	24	30	36	42	48	54	
7	14	21	28	35	42	49	56	63	
8	16	24	32	40	48	56	64	72	80
9	18	27	36	45	54	63	72	81	90
							80	90	100

(iii) Complete the next 3 multiples of 10 in the sequence below

10 20 30 40 50 60 70

Answers

All questions:


(i) the 100 square

1	2	3	4	5	6	7	8	9	10
11	12	13	14	15	16	17	18	19	20
21	22	23	24	25	26	27	28	29	30
31	32	33	34	35	36	37	38	39	40
41	42	43	44	45	46	47	48	49	50
51	52	53	54	55	56	57	58	59	60
61	62	63	64	65	66	67	68	69	70
71	72	73	74	75	76	77	78	79	80
81	82	83	84	85	86	87	88	89	90
91	92	93	94	95	96	97	98	99	100

(ii) the multiplication square

×	2	3	4	5	6	7	8	9	
2	4	6	8	10	12	14	16	18	20
3	6	9	12	15	18	21	24	27	30
4	8	12	16	20	24	28	32	36	40
5	10	15	20	25	30	35	40	45	50
6	12	18	24	30	36	42	48	54	60
7	14	21	28	35	42	49	56	63	70
8	16	24	32	40	48	56	64	72	80
9	18	27	36	45	54	63	72	81	90
10	20	30	40	50	60	70	80	90	100

1. .



(iii)

10 20 30 40 50 60 70 80 90 100

2. see above for (i) and (ii)

10 20 30 40 50 60 70 80 90 100

3. see above for (i) and (ii)

10 20 30 40 50 60 70 80 90 100