



1. Write down these multiples of 2




2. Write down these multiples of 5




multiple (2) Answers (1) 2, 4, 6, 8, 10 (2) 5, 10, 15, 20 (3) 2, 4, 6, 8, 10 (4) 5, 10, 15, 20

1. Write down these multiples of 2



2. Write down these multiples of 5



3. Write down these multiples of 2

•	• •	• • •	• • • •	• • • • •
•	• •	• • •	• • • •	• • • • •
.....

4. Write down these multiples of 5

• • • • •	• • • • •	• • • • •	• • • • •	• • • • •
.....

3. Write down these multiples of 2

•	• •	• • •	• • • •	• • • • •
•	• •	• • •	• • • •	• • • • •
.....

4. Write down these multiples of 5

• • • • •	• • • • •	• • • • •	• • • • •	• • • • •
.....