


1. (a) Here are some multiples of 10 shown on a ruler



Write these multiples of 10 in the correct places in

(i) the 100 square

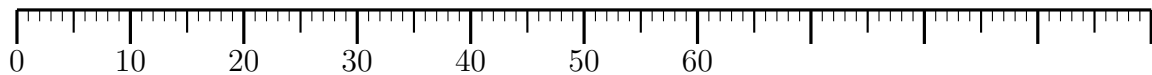
1	2	3	4	5	6	7	8	9	
11	12	13	14	15	16	17	18	19	
21	22	23	24	25	26	27	28	29	
31	32	33	34	35	36	37	38	39	
41	42	43	44	45	46	47	48	49	
51	52	53	54	55	56	57	58	59	
61	62	63	64	65	66	67	68	69	70
71	72	73	74	75	76	77	78	79	80
81	82	83	84	85	86	87	88	89	90
91	92	93	94	95	96	97	98	99	100

(ii) the multiplication square

×	2	3	4	5	6	7	8	9	
2	4	6	8	10	12	14	16	18	
3	6	9	12	15	18	21	24	27	
4	8	12	16	20	24	28	32	36	
5	10	15	20	25	30	35	40	45	
6	12	18	24	30	36	42	48	54	
7	14	21	28	35	42	49	56	63	70
8	16	24	32	40	48	56	64	72	80
9	18	27	36	45	54	63	72	81	90
						70	80	90	100

multiple Q1 70, 80, 90, 100 Q2(i) and (ii) 10, 20, 30 (iii) 40, 50, 60, 70, 80, 90, 100

1. (a) Here are some multiples of 10 shown on a ruler



Write these multiples of 10 in the correct places in

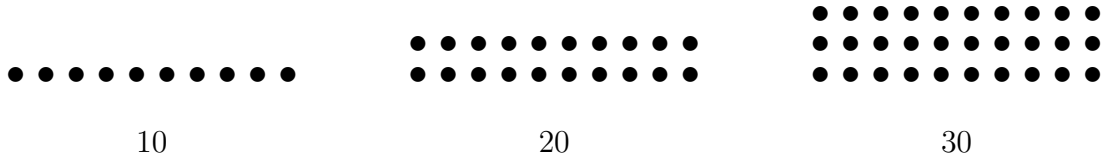
(i) the 100 square

1	2	3	4	5	6	7	8	9	
11	12	13	14	15	16	17	18	19	
21	22	23	24	25	26	27	28	29	
31	32	33	34	35	36	37	38	39	
41	42	43	44	45	46	47	48	49	
51	52	53	54	55	56	57	58	59	
61	62	63	64	65	66	67	68	69	70
71	72	73	74	75	76	77	78	79	80
81	82	83	84	85	86	87	88	89	90
91	92	93	94	95	96	97	98	99	100

(ii) the multiplication square

×	2	3	4	5	6	7	8	9	
2	4	6	8	10	12	14	16	18	
3	6	9	12	15	18	21	24	27	
4	8	12	16	20	24	28	32	36	
5	10	15	20	25	30	35	40	45	
6	12	18	24	30	36	42	48	54	
7	14	21	28	35	42	49	56	63	70
8	16	24	32	40	48	56	64	72	80
9	18	27	36	45	54	63	72	81	90
						70	80	90	100

2. Write these multiples of 10 in the correct places in



(i) the 100 square

1	2	3	4	5	6	7	8	9	
11	12	13	14	15	16	17	18	19	
21	22	23	24	25	26	27	28	29	
31	32	33	34	35	36	37	38	39	40
41	42	43	44	45	46	47	48	49	50
51	52	53	54	55	56	57	58	59	60
61	62	63	64	65	66	67	68	69	70
71	72	73	74	75	76	77	78	79	80
81	82	83	84	85	86	87	88	89	90
91	92	93	94	95	96	97	98	99	100

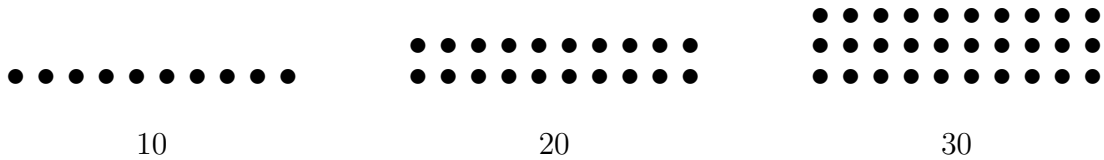
(ii) the multiplication square

×	2	3	4	5	6	7	8	9	
2	4	6	8	10	12	14	16	18	
3	6	9	12	15	18	21	24	27	
4	8	12	16	20	24	28	32	36	40
5	10	15	20	25	30	35	40	45	50
6	12	18	24	30	36	42	48	54	60
7	14	21	28	35	42	49	56	63	70
8	16	24	32	40	48	56	64	72	80
9	18	27	36	45	54	63	72	81	90
			40	50	60	70	80	90	100

(iii) Complete the next 7 multiples of 10 in the sequence below

10 20 30

2. Write these multiples of 10 in the correct places in



(i) the 100 square

1	2	3	4	5	6	7	8	9	
11	12	13	14	15	16	17	18	19	
21	22	23	24	25	26	27	28	29	
31	32	33	34	35	36	37	38	39	40
41	42	43	44	45	46	47	48	49	50
51	52	53	54	55	56	57	58	59	60
61	62	63	64	65	66	67	68	69	70
71	72	73	74	75	76	77	78	79	80
81	82	83	84	85	86	87	88	89	90
91	92	93	94	95	96	97	98	99	100

(ii) the multiplication square

×	2	3	4	5	6	7	8	9	
2	4	6	8	10	12	14	16	18	
3	6	9	12	15	18	21	24	27	
4	8	12	16	20	24	28	32	36	40
5	10	15	20	25	30	35	40	45	50
6	12	18	24	30	36	42	48	54	60
7	14	21	28	35	42	49	56	63	70
8	16	24	32	40	48	56	64	72	80
9	18	27	36	45	54	63	72	81	90
			40	50	60	70	80	90	100

(iii) Complete the next 7 multiples of 10 in the sequence below

10 20 30