


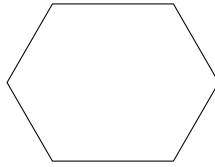
1. Tick [✓] the pentagon.



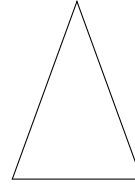
[ ]



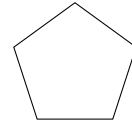
[ ]



[ ]



[ ]



[ ]

**5th picture**

(1 Mark)

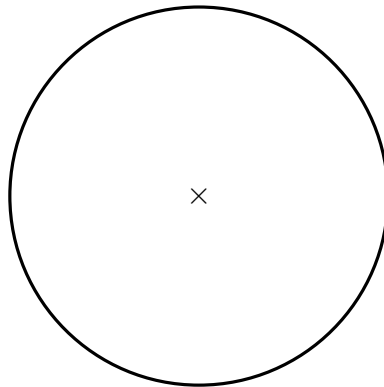
2. A triangle has three equal angles.

Write down the mathematical name of this triangle.

**2. equilateral**

(1 Mark)

3. Cain says that the centre of this circle is marked with a cross (×).



Is he correct?

**3. ....Yes.....**

(1 Mark)

4. Complete this calculation  $1.3 \times 10 = \dots\dots$

**13**

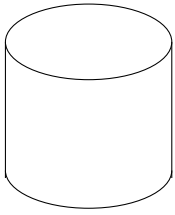
(1 Mark)

5. Complete this calculation  $59.6 \times 1000 = \dots\dots$


**59 600**

(1 Mark)

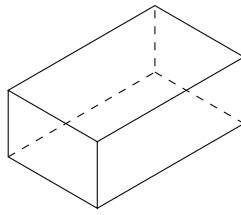
6. Tick [✓] the cone.



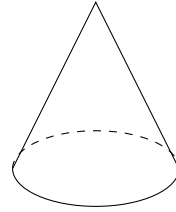
[ ]



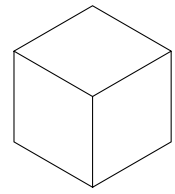
[ ]



[ ]



[ ]



[ ]

**4th picture**

(1 Mark)