


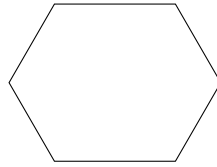
1. Tick [✓] the pentagon.



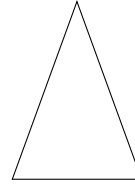
[]



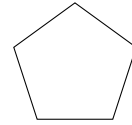
[]



[]



[]



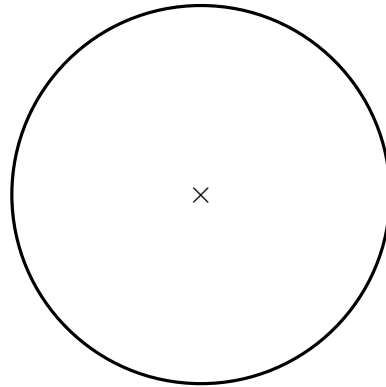
[]

2. A triangle has three equal angles.

Write down the mathematical name of this triangle.

2.

3. Cain says that the centre of this circle is marked with a cross (×).



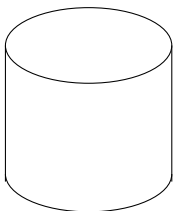
Is he correct?

3.


4. Complete this calculation $1.3 \times 10 = \dots$

5. Complete this calculation $59.6 \times 1000 = \dots$

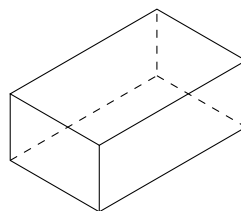
6. Tick [✓] the cone.



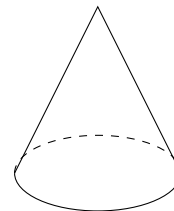
[]



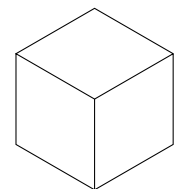
[]



[]



[]



[]