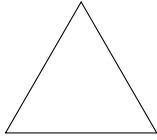


1. Write down the order of rotational symmetry below these shapes.

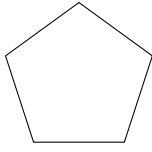


....

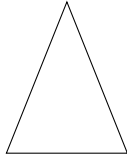


....

2. Write down the order of rotational symmetry below these shapes.

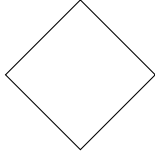


....

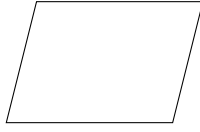


....

3. Write down the order of rotational symmetry below these shapes.

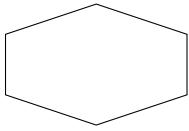


....

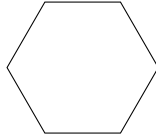


....

4. Write down the order of rotational symmetry below these shapes.



....

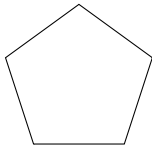


....

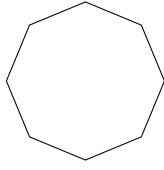


....

5. Write down the order of rotational symmetry below these shapes.

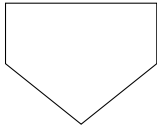


....

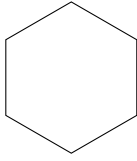


....

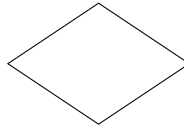
6. Write down the order of rotational symmetry below these shapes.



....



....



....

Answers

1. 3 and 2
2. 5 and 1
3. 4 and 2
4. 2 and 6 and 4
5. 5 and 8
6. 1 and 6 and 2