

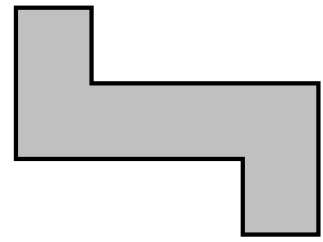
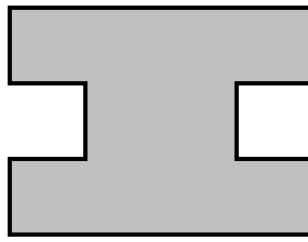
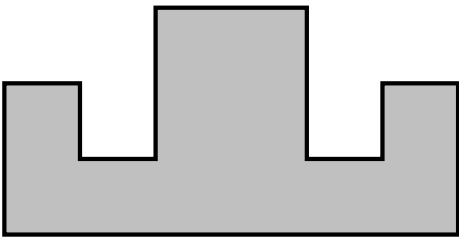
1. Here are some letters.

J N T V Z

Some of these letters have a line of symmetry and some do not.

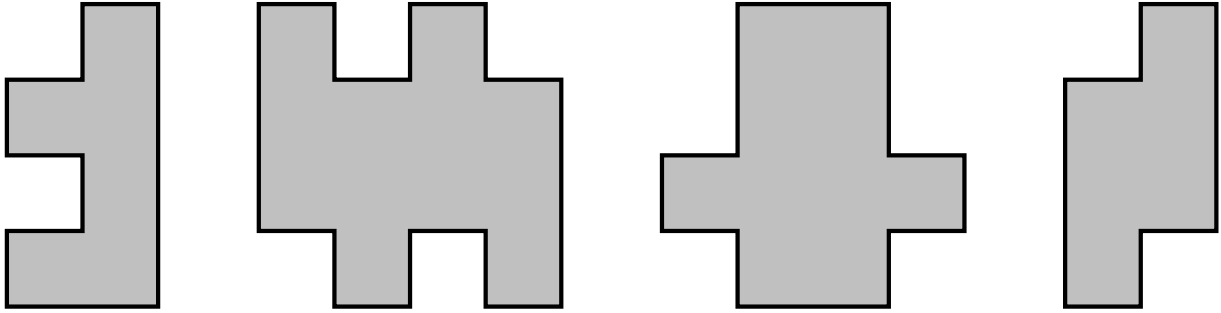
Draw a line of symmetry on each letter (if there is one).

2. Some shapes have a line of symmetry and some do not.



Draw a line of symmetry on each shape (if there is one).

3. Some shapes have a line of symmetry and some do not.



Draw a line of symmetry on each shape (if there is one).

4. Here are some letters.

H N S W Z

Some of these letters have a line of symmetry and some do not.

Draw a line of symmetry on each letter (if there is one).

Answers

1. J none
N none
T :
V :
Z none
2. 1st :
2nd ... or :
3rd none
3. 1st none
2nd none
3rd :
4th none
4. H : or ...
N none
S none
W :
Z none