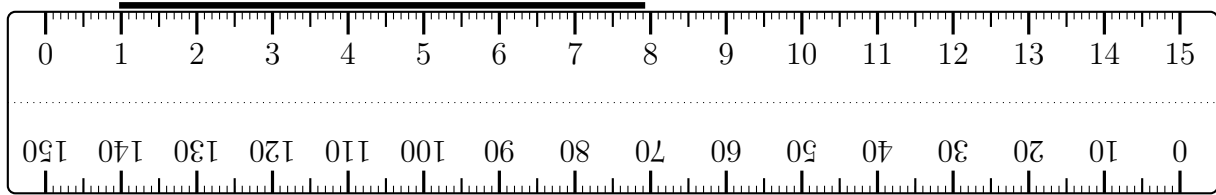


1. Ishaan says the length of this line is 7.9 cm.

He is wrong.



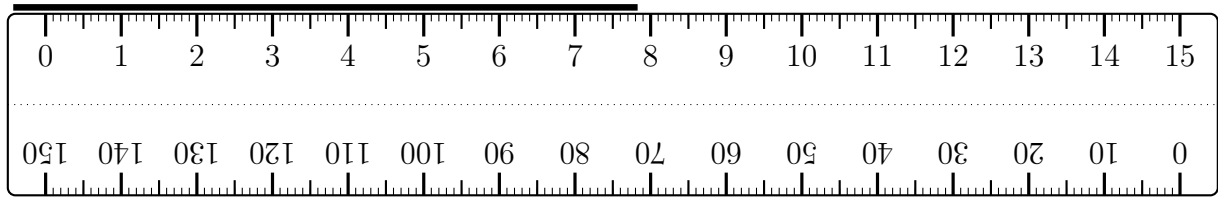
Explain why Ishaan is wrong.

.....

.....

2. Cecily says the length of this line is 7.8 cm.

She is wrong.



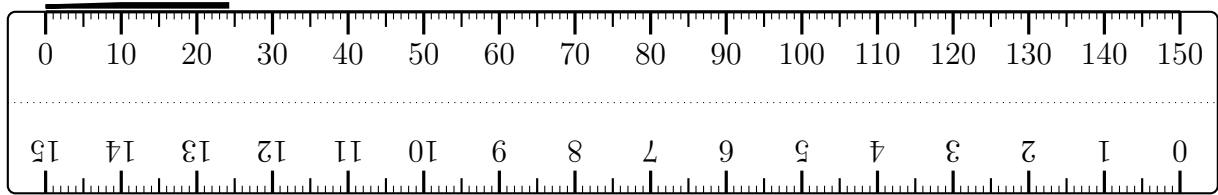
Explain why Cecily is wrong.

.....

.....

3. Mark says the length of the line is 24 cm.

He is wrong.



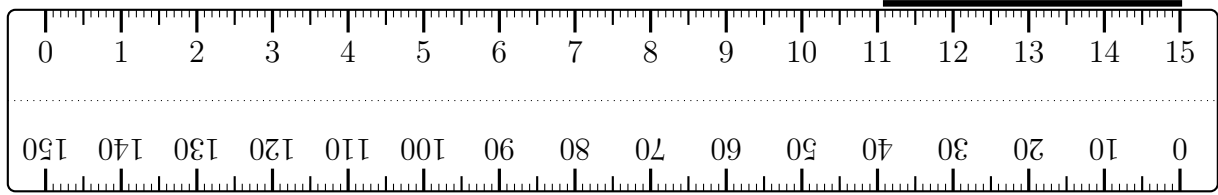
Explain why Mark is wrong.

.....

.....

4. Hira says the length of this line is 11.1 cm.

She is wrong.



Explain why Hira is wrong.

.....

.....

Answers

1. line should begin where 0 cm is written not where 1 cm is written
2. line should begin where 0 cm is written not the end of the ruler
3. the ruler is measuring millimetres, not centimetres
4. line should begin where 0 cm is written not where 15 cm is written