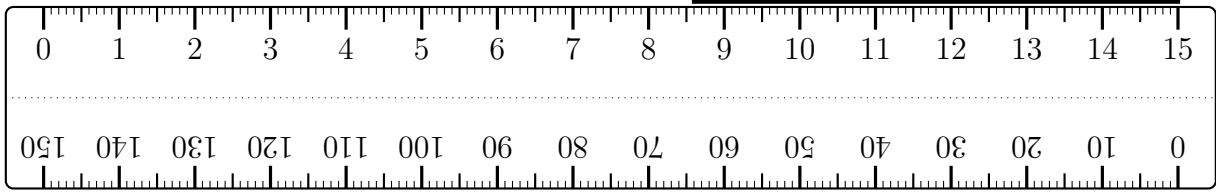


1. Katherine is **wrong** when she says the length of this line is 8.6 cm.

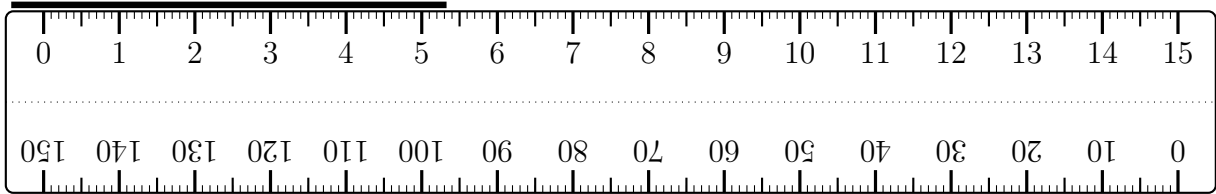


Explain why Katherine is wrong.

.....

.....

2. Nickolas is **wrong** when he says the length of this line is 5.3 cm.

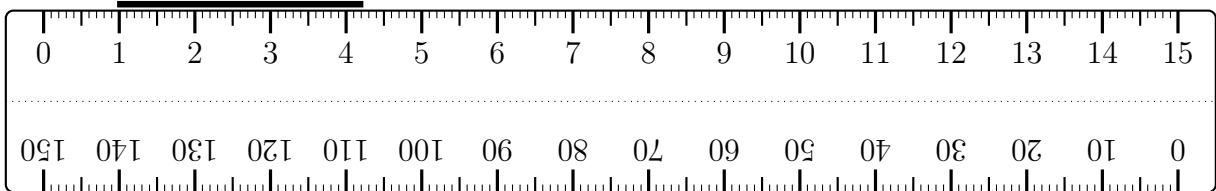


Explain why Nickolas is wrong.

.....

.....

3. Teagan is **wrong** when she says the length of this line is 4.2 cm.

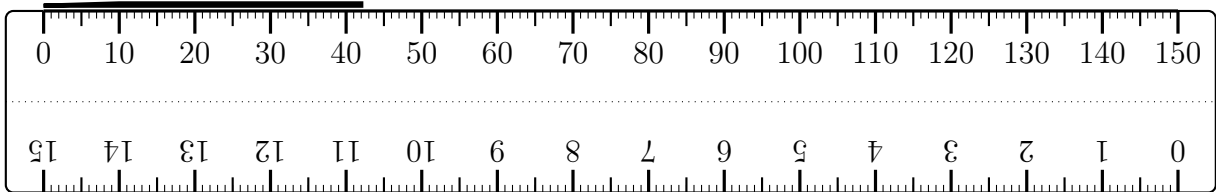


Explain why Teagan is wrong.

.....

.....

4. Leo is **wrong** when he says the length of the line is 42 cm.

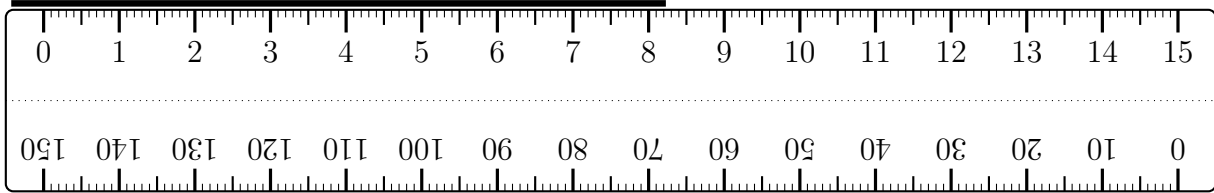


Explain why Leo is wrong.

.....

.....

5. Bobbi is **wrong** when she says the length of this line is 8.2 cm.

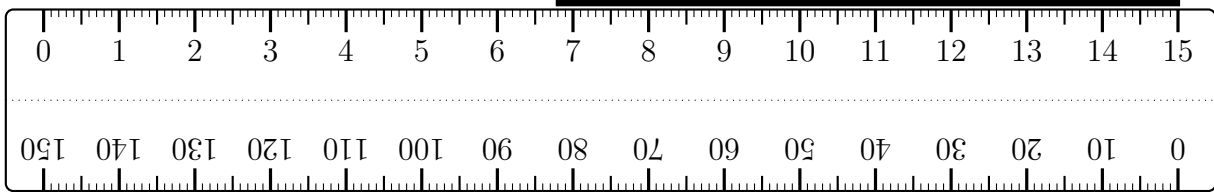


Explain why Bobbi is wrong.

.....

.....

6. Rory is **wrong** when he says the length of this line is 6.8 cm.

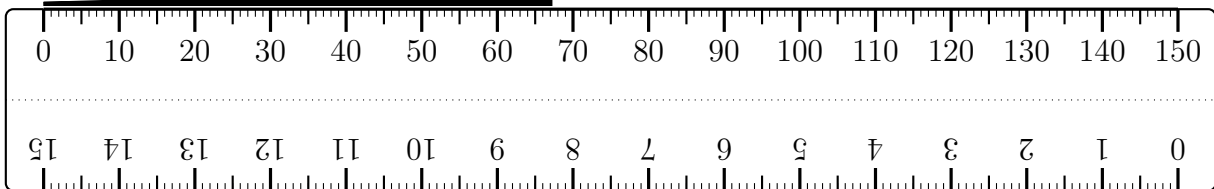


Explain why Rory is wrong.

.....

.....

7. Vivienne is **wrong** when she says the length of the line is 67 cm.



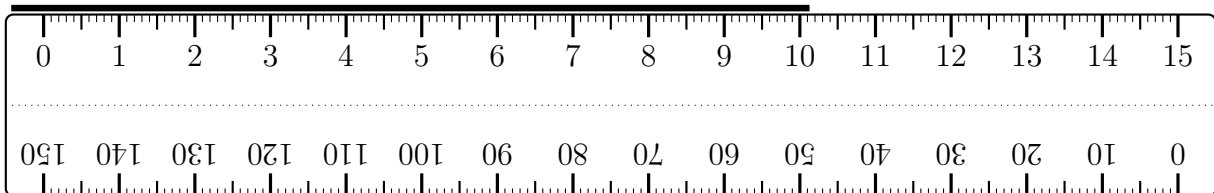
Explain why Vivienne is wrong.

.....

.....

8. Owen is **wrong** when he says the length of this line is 10.1 cm.

He is wrong.



Explain why Owen is wrong.

.....

.....