

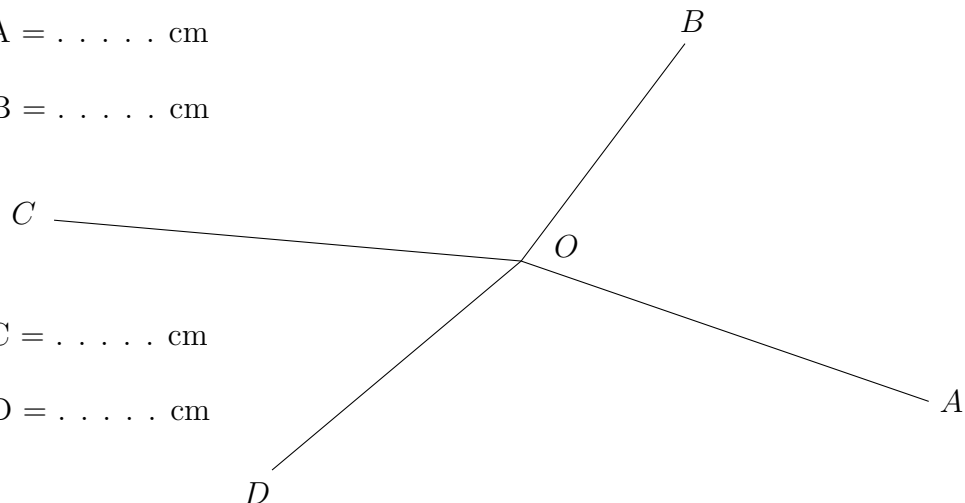
1. Measure the lengths on the diagram.

a) $OA = \dots\dots$ cm

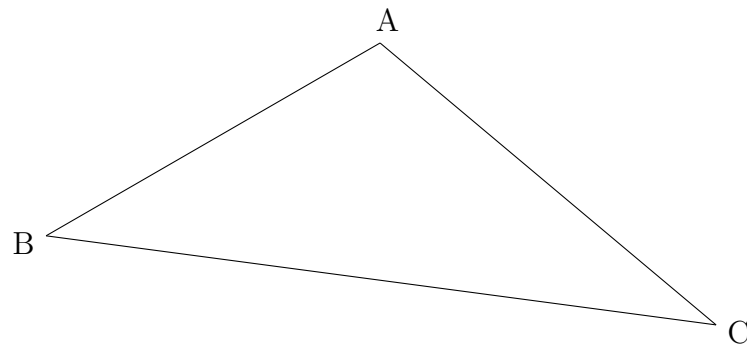
b) $OB = \dots\dots$ cm

c) $OC = \dots\dots$ cm

d) $OD = \dots\dots$ cm



2. Here is a diagram of a scalene triangle ABC



a) Measure the length of the line AB $\dots\dots$ cm

b) Measure the length of the line BC. $\dots\dots$ cm

scaleInterpret (3) Answers 1a) 5.7 b) 3.6, c) 6.2, d) 4.3 2a) 5.1 b) 8.9 3a) 6.7 b) 5.7 c) 3.6 d) 4.8

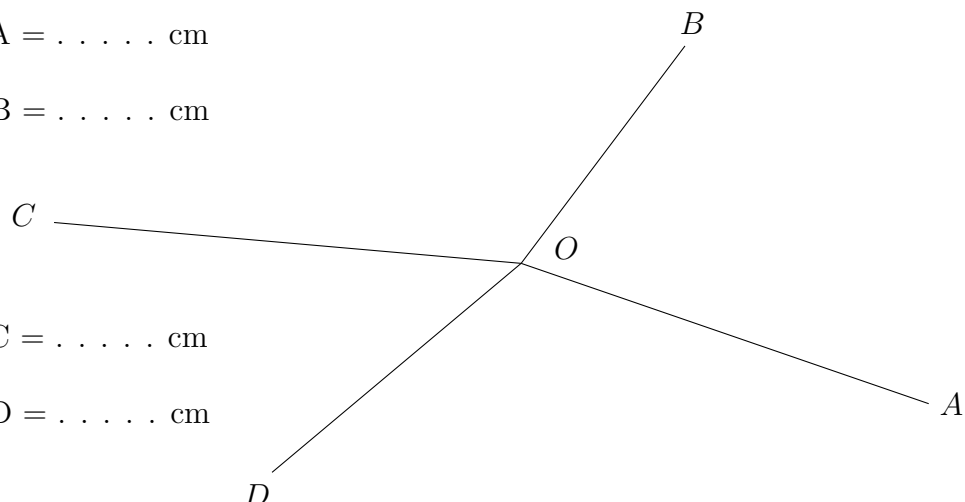
1. Measure the lengths on the diagram.

a) $OA = \dots\dots$ cm

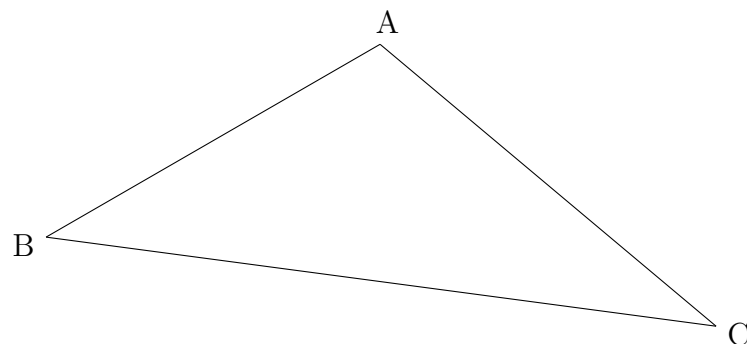
b) $OB = \dots\dots$ cm

c) $OC = \dots\dots$ cm

d) $OD = \dots\dots$ cm



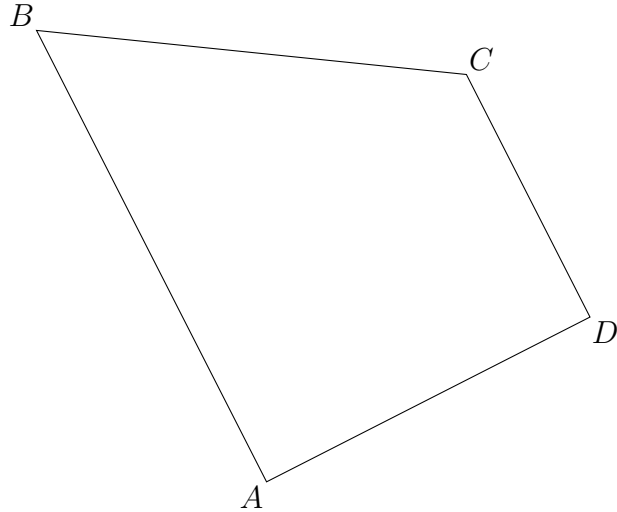
2. Here is a diagram of a scalene triangle ABC



a) Measure the length of the line AB $\dots\dots$ cm

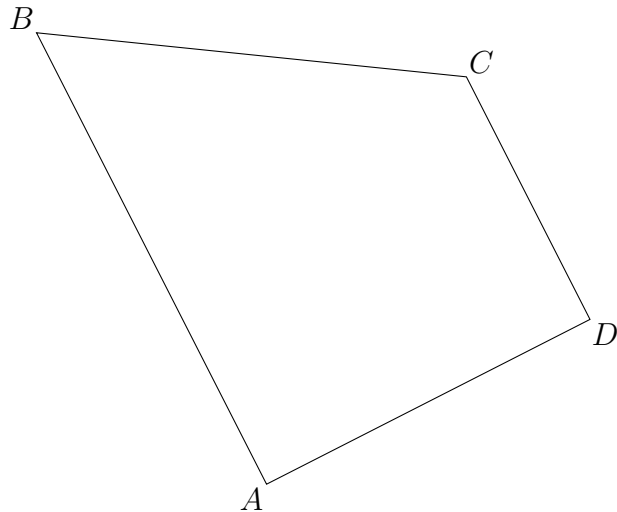
b) Measure the length of the line BC. $\dots\dots$ cm

3. Here is a trapezium ABCD.



- Measure the length of the line AB cm
- Measure the length of the line BC cm
- Measure the length of the line CD cm
- Measure the length of the line AD cm

3. Here is a trapezium ABCD.



- Measure the length of the line AB cm
- Measure the length of the line BC cm
- Measure the length of the line CD cm
- Measure the length of the line AD cm