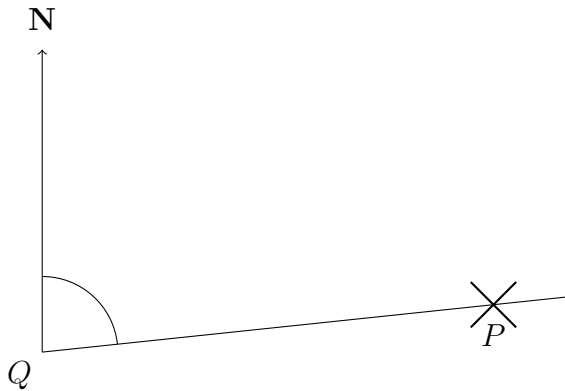
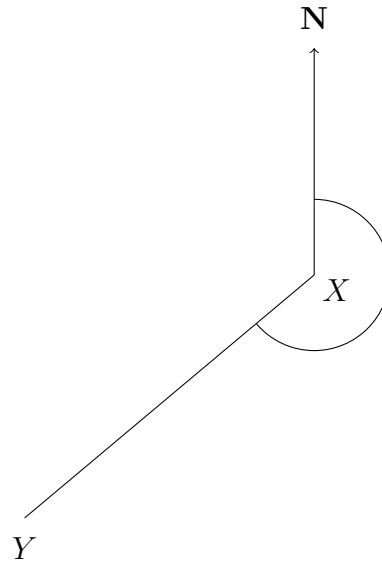


1. These diagrams show the position of

(a) two towers P and Q



(b) two treasure troves X and Y



Write down

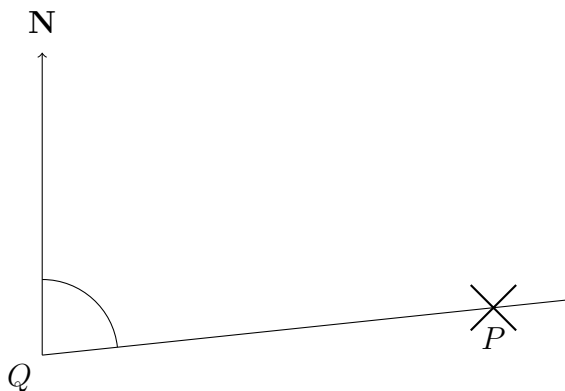
(a) the bearing of P from Q°

(b) the bearing of Y from X°

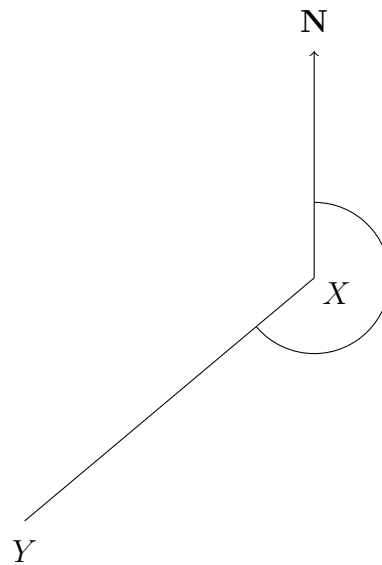
scaleInterpret (11) answers: 1a) 084 b) 230 2a) 252 2b) 072 2c) 338

1. These diagrams show the position of

(a) two towers P and Q



(b) two treasure troves X and Y

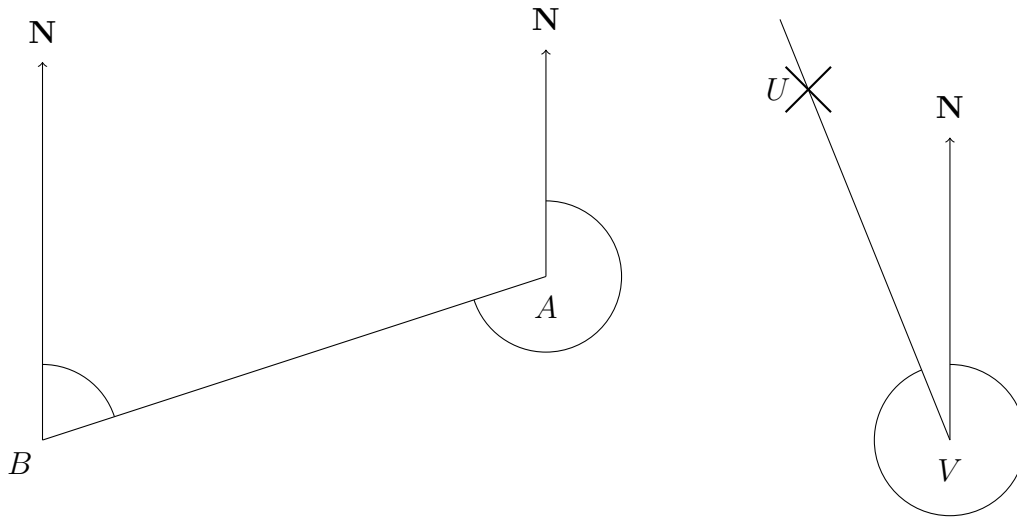


Write down

(a) the bearing of P from Q°

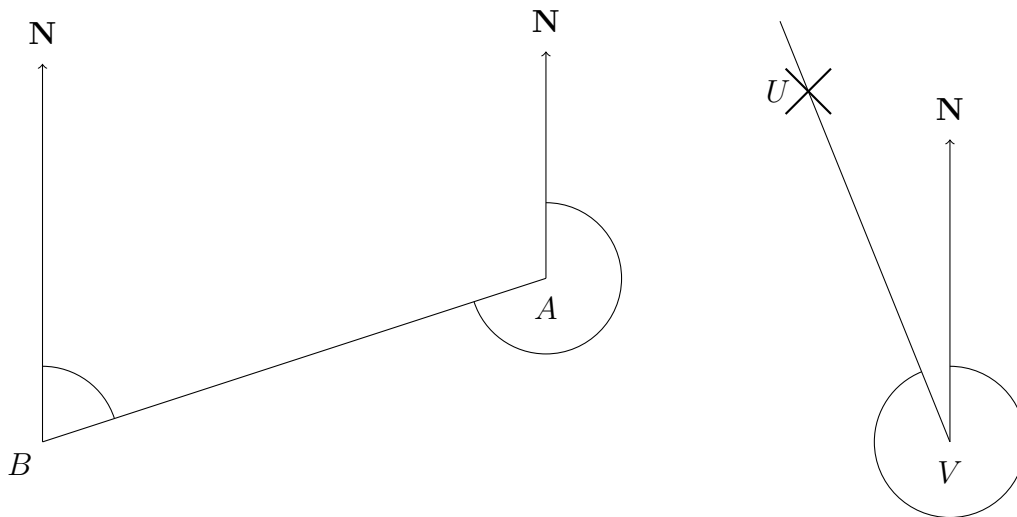
(b) the bearing of Y from X°

2. The diagram shows the position of four geocaches A, B, C, D, U and V.



- (a) Write down the bearing of B from A.°
- (b) Write down the bearing of A from B.°
- (c) Write down the bearing of U from V.°

2. The diagram shows the position of four geocaches A, B, C, D, U and V.



- (a) Write down the bearing of B from A.°
- (b) Write down the bearing of A from B.°
- (c) Write down the bearing of U from V.°