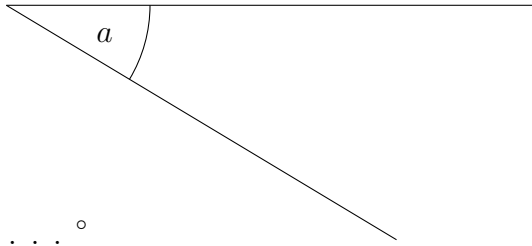
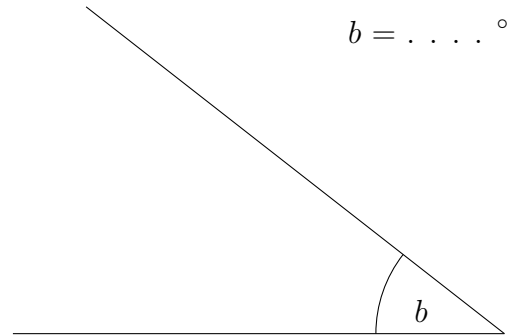


1. Measure the size of the angles marked a and b .

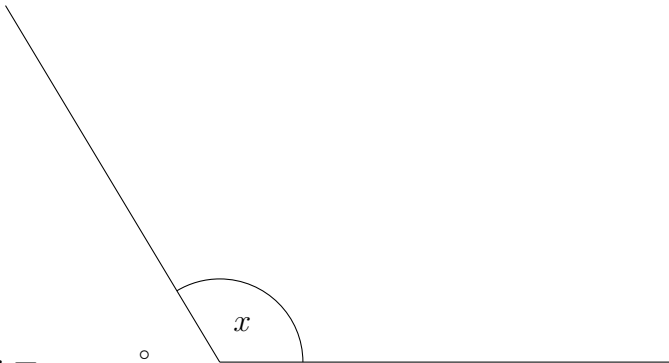


$$a = \dots\dots^\circ$$

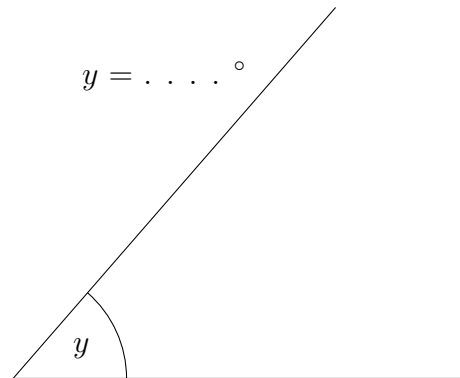


$$b = \dots\dots^\circ$$

2. Measure the size of the angle marked x and y .



$$x = \dots\dots^\circ$$

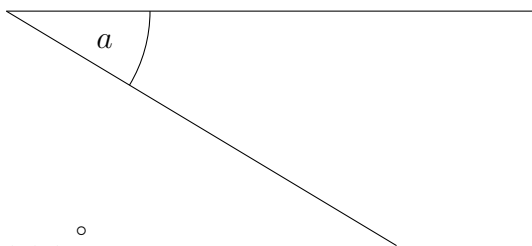


$$y = \dots\dots^\circ$$

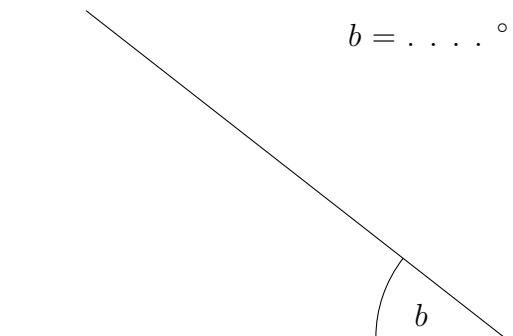
scaleInterpret (10) Answers 1a) 31, b) 38 2a) 121, b) 49

3) a = 33, b = 26, c = 58, d = 122, e = 58, f = 122, p = 73, q = 107, x = 126, y = 54

1. Measure the size of the angles marked a and b .

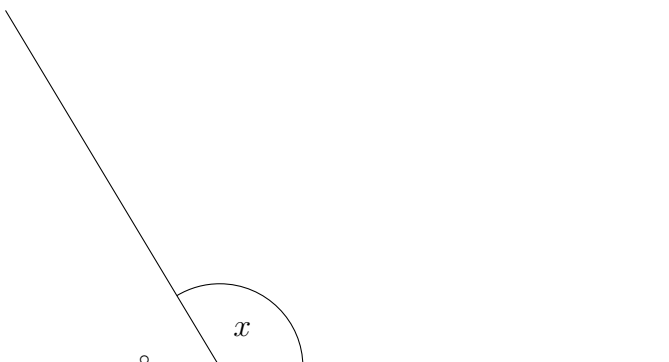


$$a = \dots\dots^\circ$$

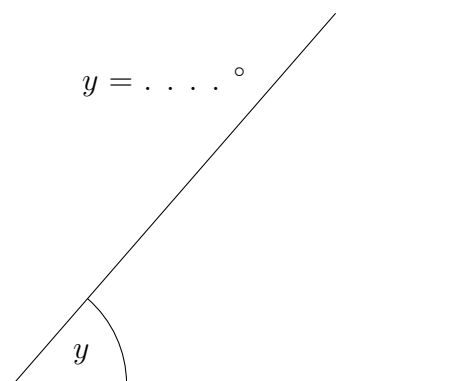


$$b = \dots\dots^\circ$$

2. Measure the size of the angle marked x and y .

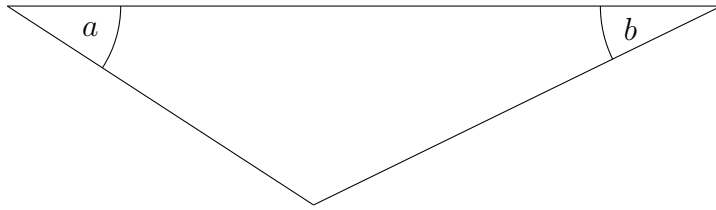


$$x = \dots\dots^\circ$$

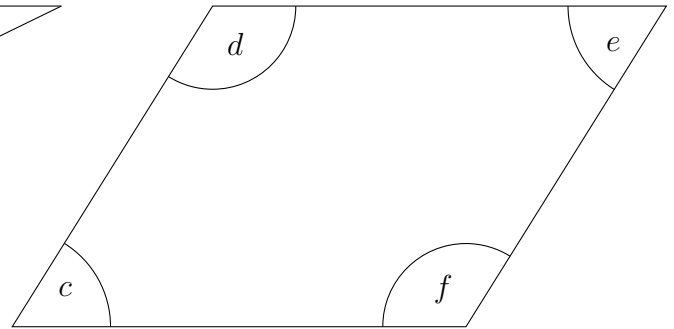


$$y = \dots\dots^\circ$$

3. Measure the sizes of the angles $a, b, c, d, e, f, p, q, x$ and y .



$a = \dots\dots^\circ$ $b = \dots\dots^\circ$

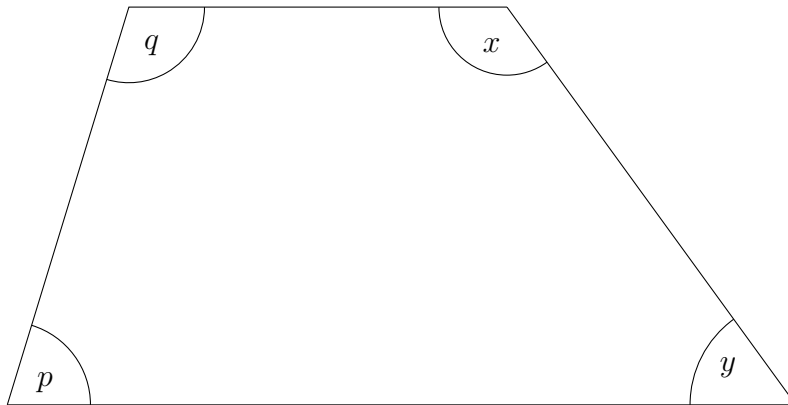


$c = \dots\dots^\circ$ $d = \dots\dots^\circ$

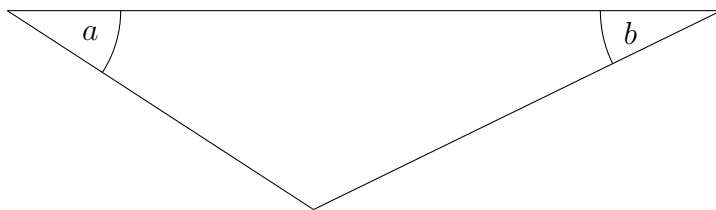
$e = \dots\dots^\circ$ $f = \dots\dots^\circ$

$p = \dots\dots^\circ$ $q = \dots\dots^\circ$

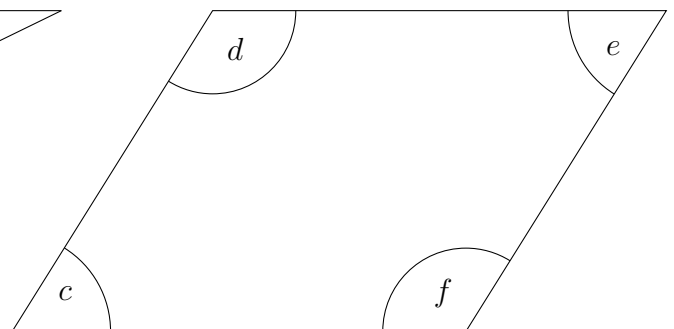
$x = \dots\dots^\circ$ $y = \dots\dots^\circ$



3. Measure the sizes of the angles $a, b, c, d, e, f, p, q, x$ and y .



$a = \dots\dots^\circ$ $b = \dots\dots^\circ$



$c = \dots\dots^\circ$ $d = \dots\dots^\circ$

$e = \dots\dots^\circ$ $f = \dots\dots^\circ$

$p = \dots\dots^\circ$ $q = \dots\dots^\circ$

$x = \dots\dots^\circ$ $y = \dots\dots^\circ$

