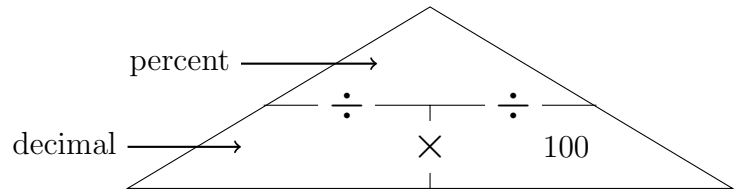


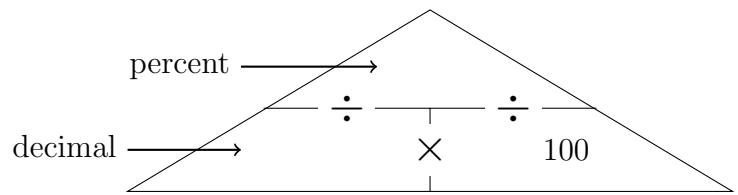
1. Write 0.73 as a percentage ..... %

You may use this proportional formula triangle if it helps you.



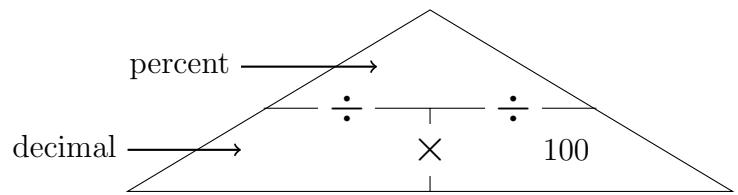
2. Write 0.2 as a percentage ..... %

You may use this proportional formula triangle if it helps you.



3. Write 1.2 as a percentage ..... %

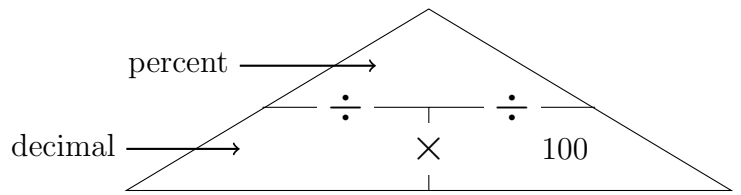
You may use this proportional formula triangle if it helps you.



4. Write  $\frac{17}{20}$

(i) as a decimal .....

(ii) as a percentage ..... %

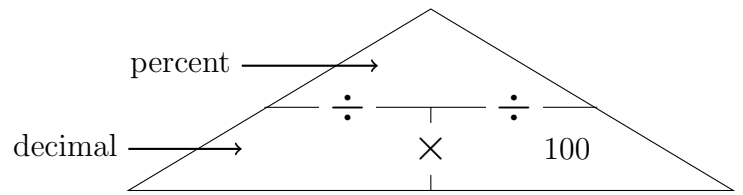


You may use this proportional formula triangle if it helps you.

5. Write  $\frac{8}{8}$

(i) as a decimal .....

(ii) as a percentage ..... %



You may use this proportional formula triangle if it helps you.

## Answers

1. 73 %
2. 20 %
3. 120 %
4. (i) 0.85, (ii) 85 %
5. (i) 1, (ii) 100 %