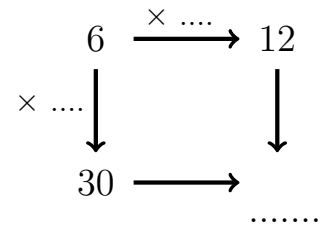


1. (i) Complete the \downarrow and the \rightarrow scale factors.

You may use the 6 row of the times table grid.

\times	2	3	4	5	6	7	8	9	10
6	12	18	24	30	36	42	48	54	60

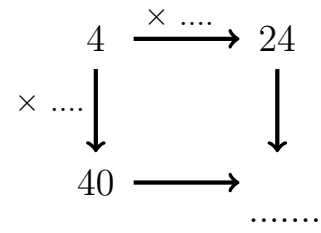


(ii) Complete the missing value of these proportional pairs.

2. (i) Complete the \downarrow and the \rightarrow scale factors.

You may use the 4 row of the times table grid.

\times	2	3	4	5	6	7	8	9	10
4	8	12	16	20	24	28	32	36	40

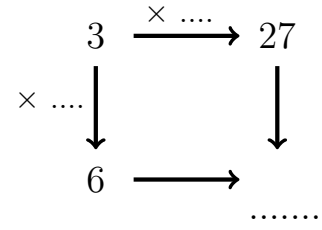


- (ii) Complete the missing value of these proportional pairs.

3. (i) Complete the \downarrow and the \rightarrow scale factors.

You may use the 3 row of the times table grid.

\times	2	3	4	5	6	7	8	9	10
3	6	9	12	15	18	21	24	27	30

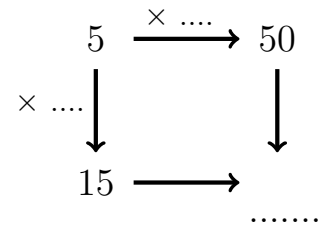


(ii) Complete the missing value of these proportional pairs.

4. (i) Complete the \downarrow and the \rightarrow scale factors.

You may use the 5 row of the times table grid.

\times	2	3	4	5	6	7	8	9	10
5	10	15	20	25	30	35	40	45	50



(ii) Complete the missing value of these proportional pairs.

Answers

1. (i) $\downarrow \times 5$ and $\rightarrow \times 2$; (ii) 60
2. (i) $\downarrow \times 10$ and $\rightarrow \times 6$; (ii) 240
3. (i) $\downarrow \times 2$ and $\rightarrow \times 9$; (ii) 54
4. (i) $\downarrow \times 3$ and $\rightarrow \times 10$; (ii) 150