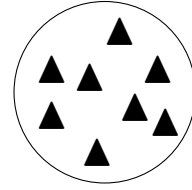


1. Complete this calculation.

You may use either diagram to help you.


(i)  $8 - 4 = \dots$



2. Complete this calculation.

You may use either diagram to help you.


(i)  $9 - 6 = \dots$



3. Complete this calculation.

You may use either diagram to help you.


(i)  $6 - 2 = \dots$



4. Complete this calculation.

You may use either diagram to help you.

(i)  $7 - 6 = \dots$



## Answers

1. 4

2. 3

3. 4

4. 1