

1. Complete the calculation  $94 - 67 = \dots\dots\dots$

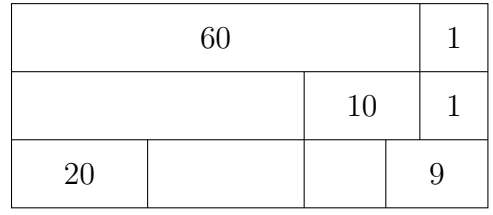
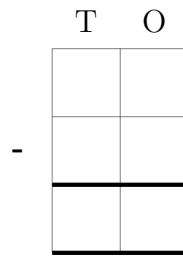
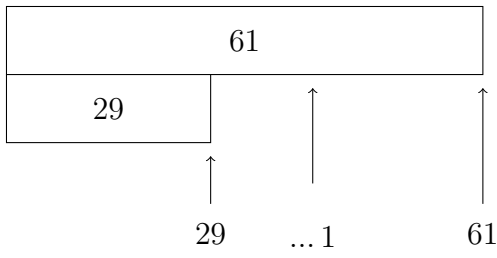
You **must** show your workings out.

94	-	T	O
67			
67			
... 4			
94			

90		4
		10
60		7

2. Complete the calculation  $61 - 29 = \dots\dots\dots$

You **must** show your workings out.



3. Complete the calculation  $83 - 37 = \dots\dots\dots$

You **must** show your workings out.

83	-	T	O
37			
37			
...3			
83			

80		3
		10
30		7

4. Complete the calculation  $93 - 35 = \dots\dots\dots$

You **must** show your workings out.

93	
35	

↑↑↑

35... 393

	T	O

90		3
		10
30		5

## Answers

1. 27
2. 32
3. 46
4. 58