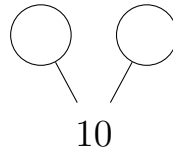
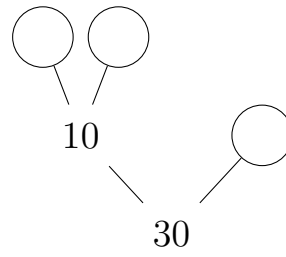


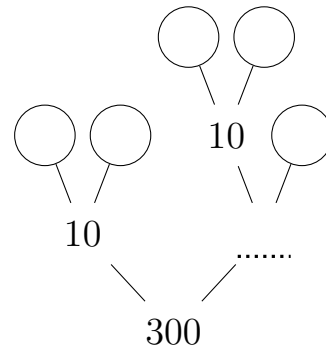
1. Complete this prime factor tree.



2. Complete this prime factor tree.




3. Complete this prime factor tree.



4. Jenna uses an “easy first” strategy to draw her prime factor trees.

Karolina uses a “smallest prime first” strategy to draw her prime factor trees.

Both girls have drawn incomplete prime factor trees.



Jenna’s prime factor tree

Karolina’s prime factor tree

Complete **either** Jenna’s **or** Karolina’s prime factor tree.

Answers

1. leaves: 2, 5
2. leaves: 2, 5, 3
3. leaves: 2, 5, 2, 5, 3
4. either tree with leaves: 2, 2, 5, 5 in appropriate order