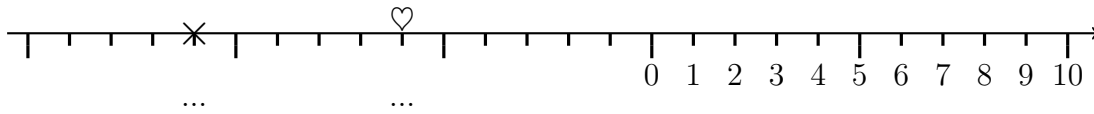
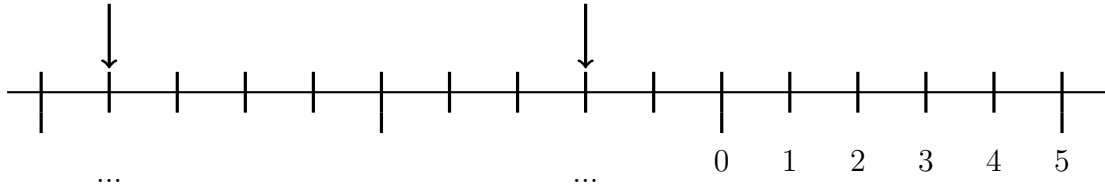


1. Write the numbers shown on this number line with

- (i) a cross (×)      (ii) a heart (♡)

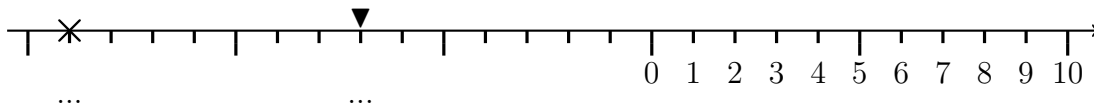


2. Write down the numbers these arrows point to.



3. Write down the numbers shown on this number line with

- (i) a cross (×)      (ii) a triangle (▼)

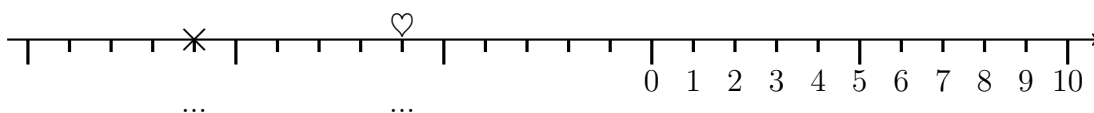


Turn over for more questions

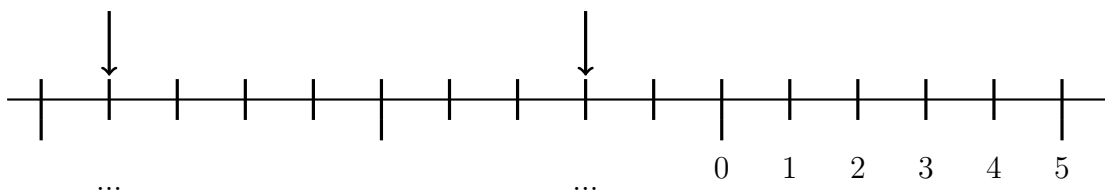
negative (1) answers 1) -11 and -6; 2) -9 and -2; 3) -14 and -7; 4a) -9 b) -13 c) -17

1. Write the numbers shown on this number line with

- (i) a cross (×)      (ii) a heart (♡)

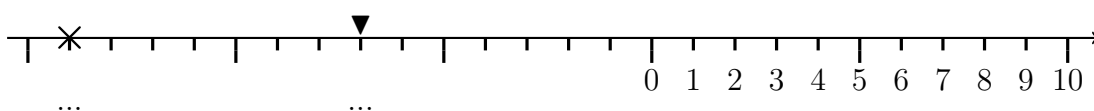


2. Write down the numbers these arrows point to.



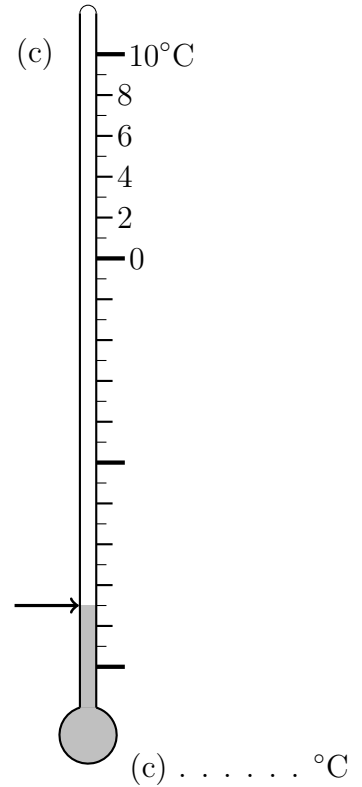
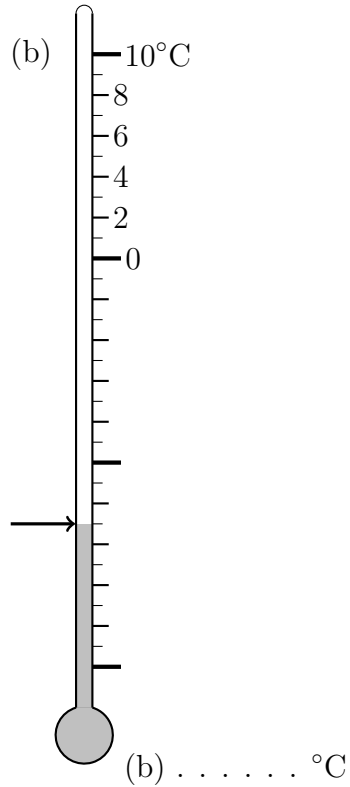
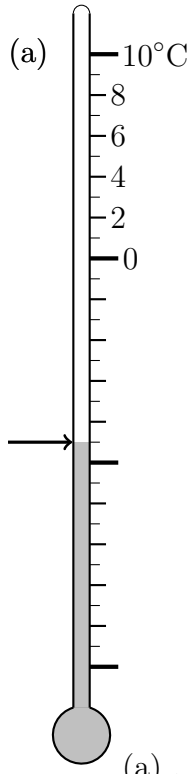
3. Write down the numbers shown on this number line with

- (i) a cross (×)      (ii) a triangle (▼)



Turn over for more questions

4. Write down the temperatures shown on each thermometer.



4. Write down the temperatures shown on each thermometer.

