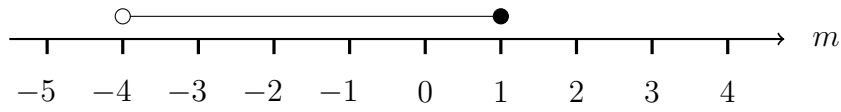


1. Here is an inequality, in m , shown on a number line.

m is an integer.

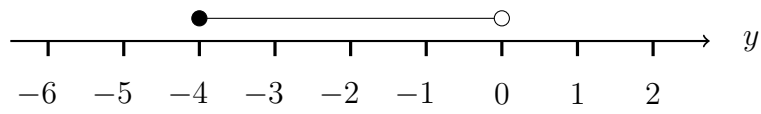


List all the possible values of m .

.....

2. Here is an inequality, in y , shown on a number line.

y is an integer.



List all the possible values of y .

.....

3. Here is an inequality, in k , shown on a number line.

k is an integer.

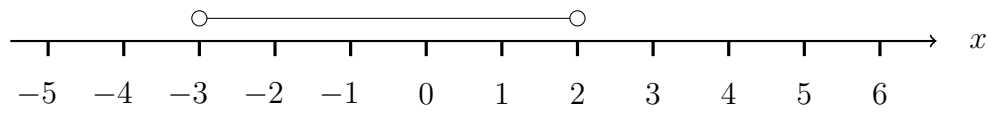


List all the possible values of k .

.....

4. Here is an inequality, in x , shown on a number line.

x is an integer.



List all the possible values of x .

.....

Answers

1. -3, -2, -1, 0, 1
2. -4, -3, -2, -1
3. -1, 0, 1, 2, 3, 4
4. -2, -1, 0, 1