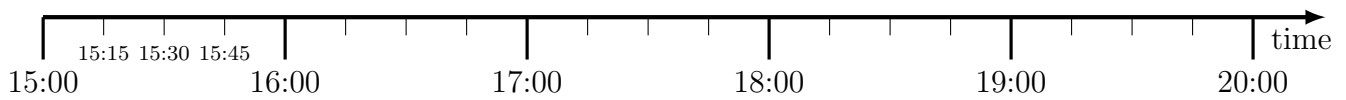
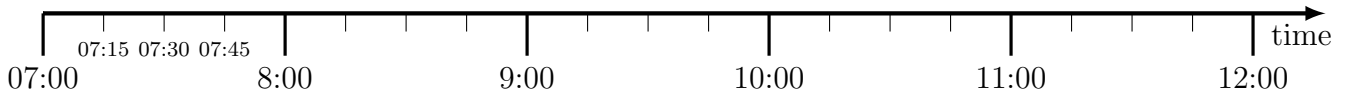


1. A coach journey starts at 15:15 and ends at 18:30



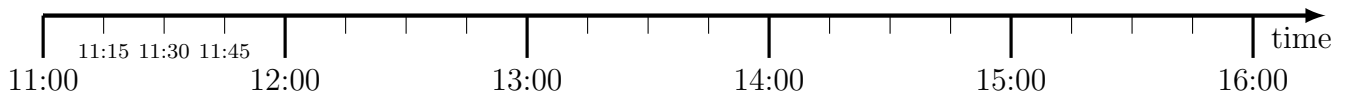
How long does the coach journey last? ..... hours and ..... minutes

2. A train journey starts at 08:30 and lasts 1 hour and 45 minutes.



What time does the train journey end? .....

3. A picnic starts at 11:45 and takes 2 hours and 30 minutes.



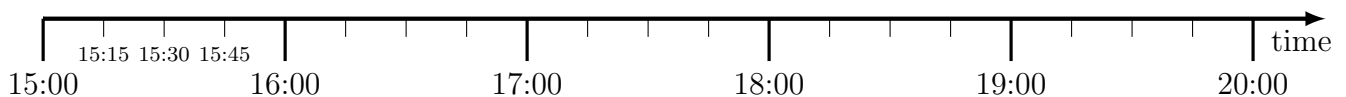
What time does the picnic end? .....

---

timeCalculate (3) Q1: 3 h 15m, Q2: 10:15, Q3: 14:15, Q4: 1h 45m, Q5: 4h 15 m, Q6: 18:00

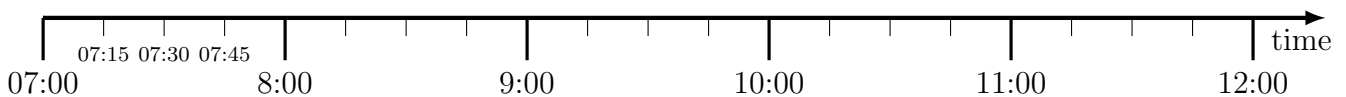
---

1. A coach journey starts at 15:15 and ends at 18:30



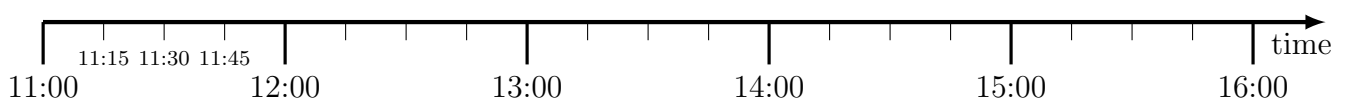
How long does the coach journey last? ..... hours and ..... minutes

2. A train journey starts at 08:30 and lasts 1 hour and 45 minutes.



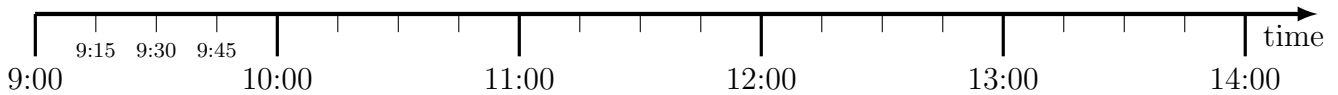
What time does the train journey end? .....

3. A picnic starts at 11:45 and takes 2 hours and 30 minutes.



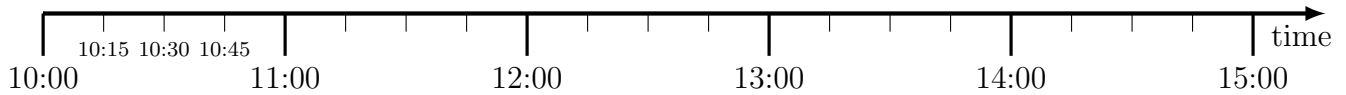
What time does the picnic end? .....

4. A cycle tour starts at 10:15 and ends at 12:00



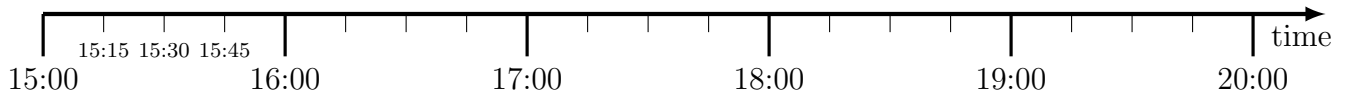
How long is the cycle tour? ..... hours and ..... minutes

5. A theme park visit starts at 10:45 and ends at 15:00



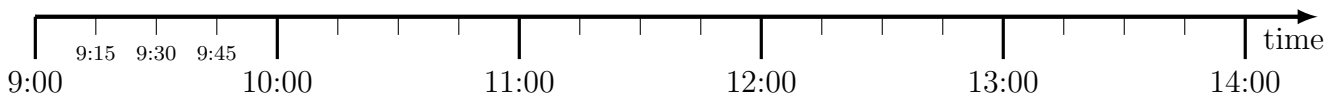
How long does the theme park visit last? ..... hours and ..... minutes

6. A coach journey starts at 15:15 and takes 2 hours and 45 minutes.



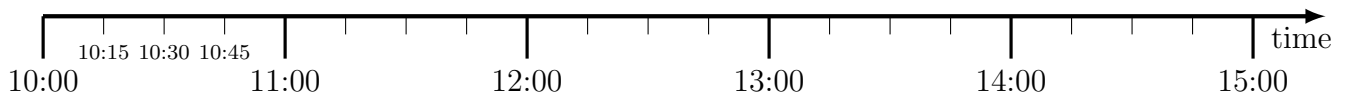
What time does the coach journey end? .....

4. A cycle tour starts at 10:15 and ends at 12:00



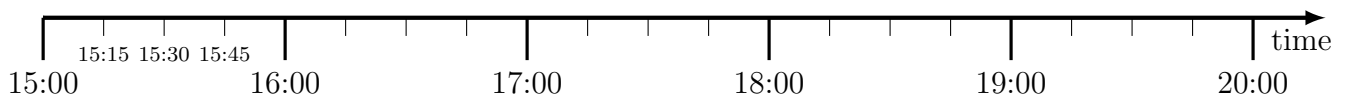
How long is the cycle tour? ..... hours and ..... minutes

5. A theme park visit starts at 10:45 and ends at 15:00



How long does the theme park visit last? ..... hours and ..... minutes

6. A coach journey starts at 15:15 and takes 2 hours and 45 minutes.



What time does the coach journey end? .....