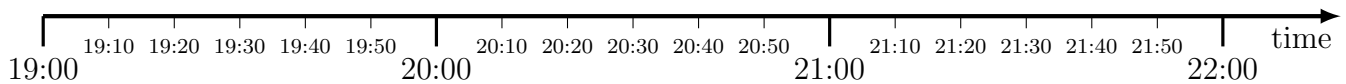
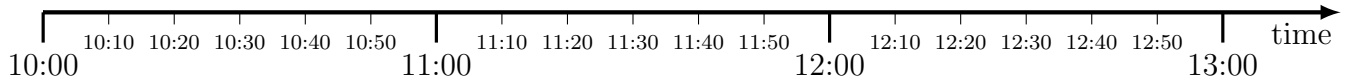


1. A T.V. programme starts at 19:20 and ends at 21:50



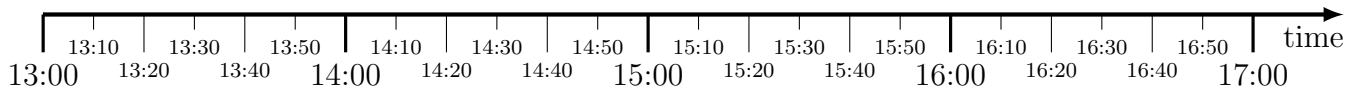
How long is the T.V. programme? hours and minutes

2. A hospital appointment starts at 10:30 and ends at 12:10



How long does the hospital appointment last? hours and minutes

3. A train journey starts at 13:10 and finishes at 17:00

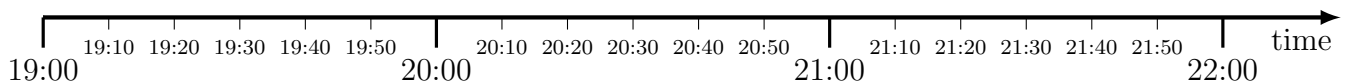


How long does the train journey last? hours and minutes

timeCalculate (2) Q1: 2 h 30 m, Q2: 1 h 40 m, Q3: 3 h 50 m,

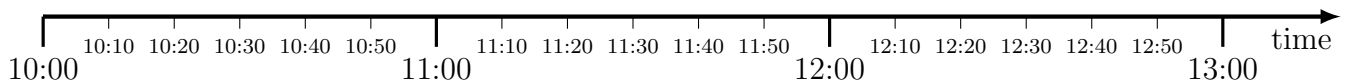
Q4: 1 h 30 m, Q5: 0 h 50 m, Q6 3 h 40 m

1. A T.V. programme starts at 19:20 and ends at 21:50



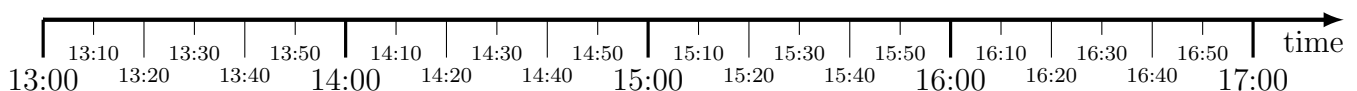
How long is the T.V. programme? hours and minutes

2. A hospital appointment starts at 10:30 and ends at 12:10



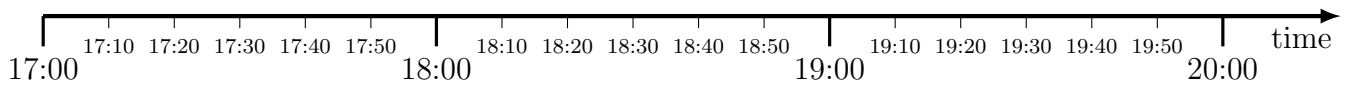
How long does the hospital appointment last? hours and minutes

3. A train journey starts at 13:10 and finishes at 17:00



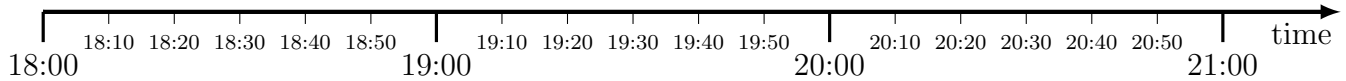
How long does the train journey last? hours and minutes

4. A T.V. programme starts at 17:20 and ends at 18:50



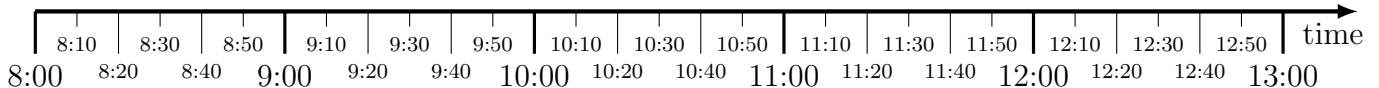
How long is the T.V. programme? hours and minutes

5. A firework display starts at 18:30 and ends at 19:20



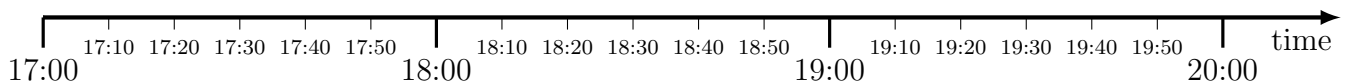
How long does the firework display last? hours and minutes

6. An art exam starts at 8:50 and ends at 12:30



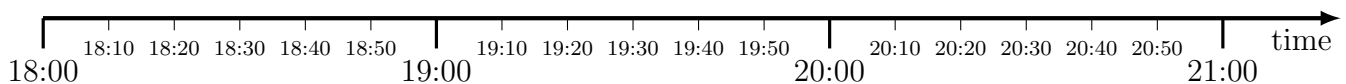
How long is the art exam? hours and minutes

4. A T.V. programme starts at 17:20 and ends at 18:50



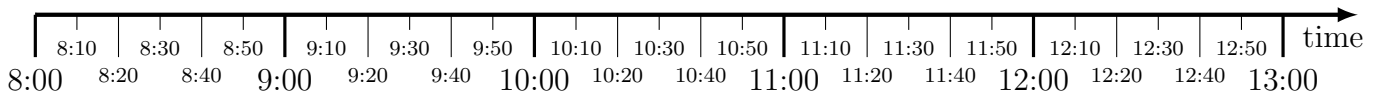
How long is the T.V. programme? hours and minutes

5. A firework display starts at 18:30 and ends at 19:20



How long does the firework display last? hours and minutes

6. An art exam starts at 8:50 and ends at 12:30



How long is the art exam? hours and minutes