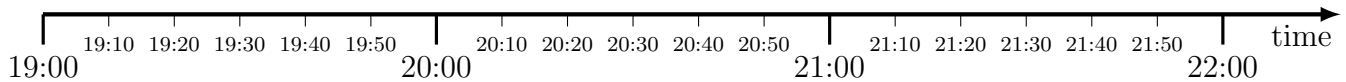


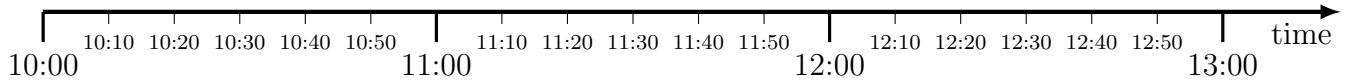
1. A T.V. programme starts at 19:20 and lasts for 1 hour and 40 minutes.



What time does the T.V. programme end?

.....

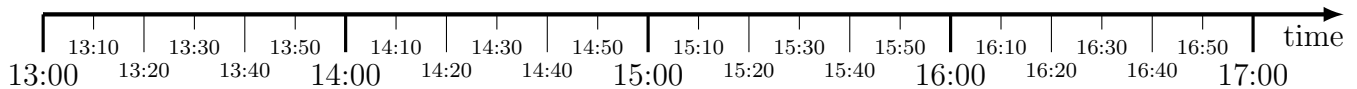
2. A dentist appointment starts at 10:40 and lasts for 10 minutes.



What time does the appointment end?

.....

3. A train journey starts at 13:30 and takes 2 hours and 40 minutes.

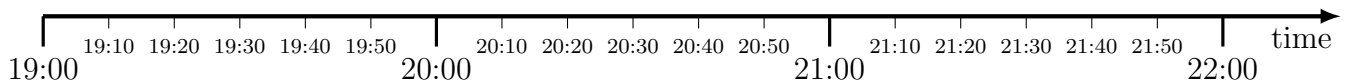


What time does the train journey end?

.....

timeCalculate (1) Q1: 21:00, Q2: 10:50, Q3: 16:10, Q4: 18:30, Q5: 19:50, Q6: 12:20

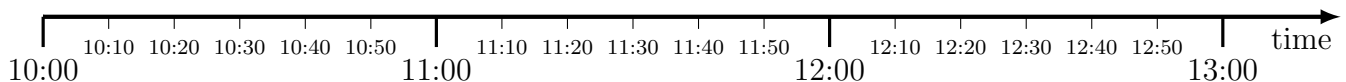
1. A T.V. programme starts at 19:20 and lasts for 1 hour and 40 minutes.



What time does the T.V. programme end?

.....

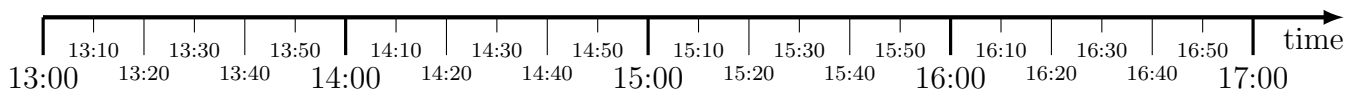
2. A dentist appointment starts at 10:40 and lasts for 10 minutes.



What time does the appointment end?

.....

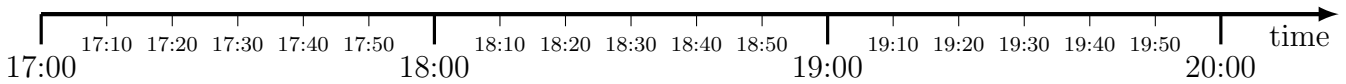
3. A train journey starts at 13:30 and takes 2 hours and 40 minutes.



What time does the train journey end?

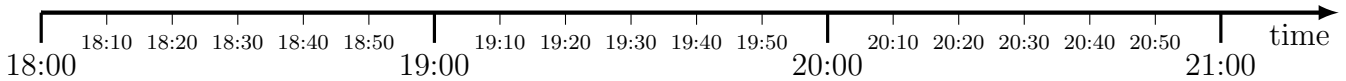
.....

4. A T.V. programme starts at 17:40 and lasts for 50 minutes.



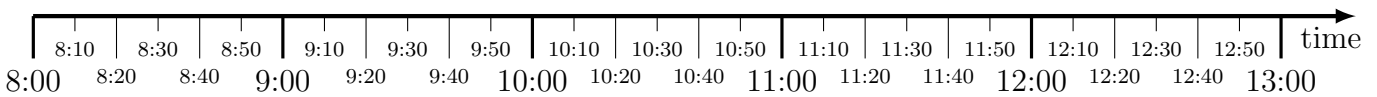
What time does the T.V. programme end?

5. A firework display starts at 18:30 and lasts for 1 hour and 20 minutes.



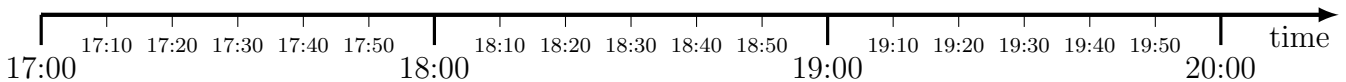
What time does the firework display end?

6. A technology exam starts at 8:50 and takes 3 hours and 30 minutes.



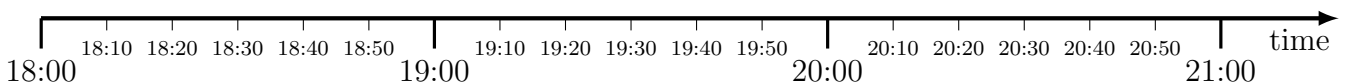
What time does the exam end?

4. A T.V. programme starts at 17:40 and lasts for 50 minutes.



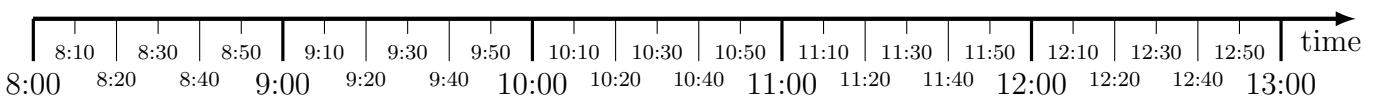
What time does the T.V. programme end?

5. A firework display starts at 18:30 and lasts for 1 hour and 20 minutes.



What time does the firework display end?

6. A technology exam starts at 8:50 and takes 3 hours and 30 minutes.



What time does the exam end?