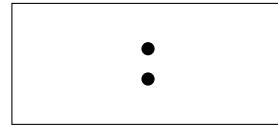

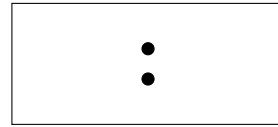



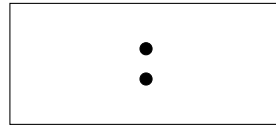

1. Write the time shown on this clock face onto the digital clock.



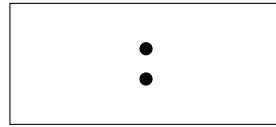

2. Write the time shown on this clock face onto the digital clock.



3. Write the time shown on this clock face onto the digital clock.



4. Write the time shown on this clock face onto the digital clock.



Answers

1. (0)8:55
2. 11:45
3. (0)3:35
4. (0)1:45