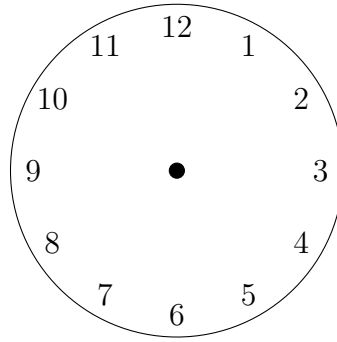
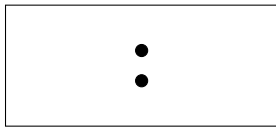



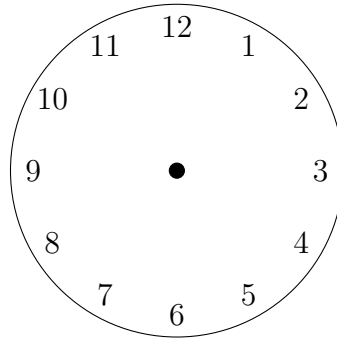
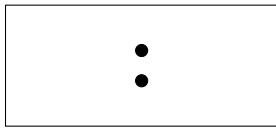
1. (i) Write “quarter to ten” on this digital clock and draw the hands on this clock face.




- (ii) Write “midnight” on this 24 hour clock.



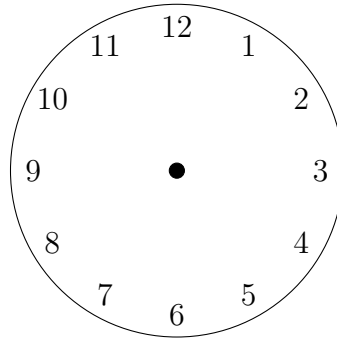

2. (i) Write “quarter to three” on this digital clock and draw the hands on this clock face.




(ii) Write “noon” on this 24 hour clock.



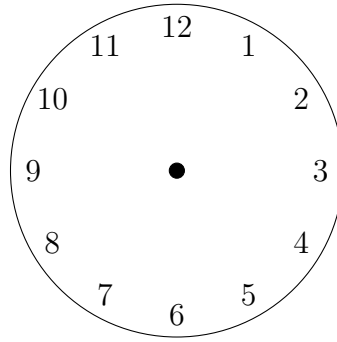
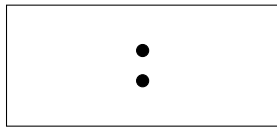
3. (i) Write “quarter to five” on this digital clock and draw the hands on this clock face.




(ii) Write “midnight” on this 24 hour clock.



4. (i) Write “quarter to nine” on this digital clock and draw the hands on this clock face.



- (ii) Write “noon” on this 24 hour clock.



Answers

1. (i) 9:45 and hands drawn (hour hand more than half way towards 10)
(ii) 00:00
2. (i) 2:45 and hands drawn (hour hand more than half way towards 3)
(ii) 12:00
3. (i) 4:45 and hands drawn (hour hand more than half way towards 5)
(ii) 00:00
4. (i) 8:45 and hands drawn (hour hand more than half way towards 9)
(ii) 12:00