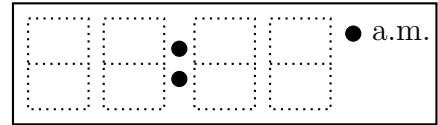
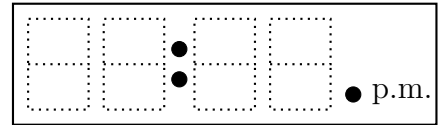


1. Write each time on the digital clock.

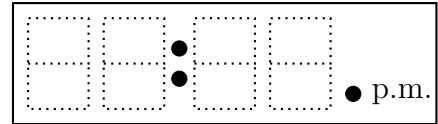
(a) "Twenty past seven"



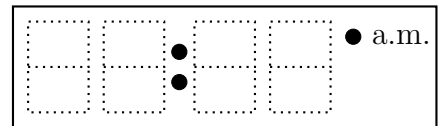
(b) "Five past two"



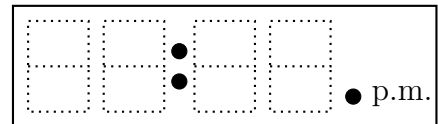
(c) "Twenty five past eight"



(d) "Five past ten"



(e) "Ten past four"

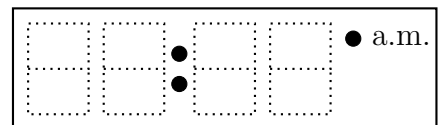


timeRead (7) Q1. (a) 07:20 (b) 02:05 (c) 08:25 (d) 10:05 (e) 04:10

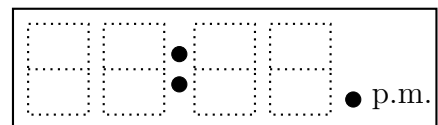
Q2: (a) 11:05 (b) 06:20 (c) 09:10 (d) 03:05 (e) 01:25

1. Write each time on the digital clock.

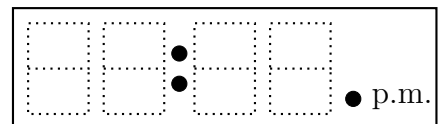
(a) "Twenty past seven"



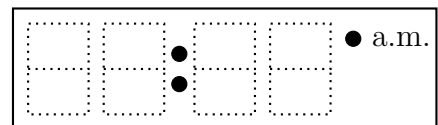
(b) "Five past two"



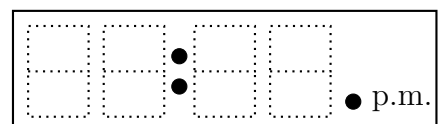
(c) "Twenty five past eight"



(d) "Five past ten"

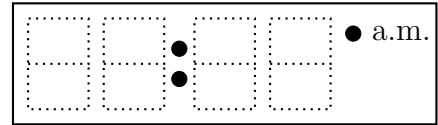


(e) "Ten past four"

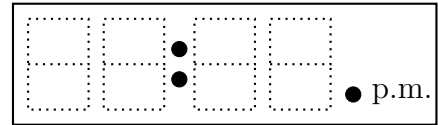


2. Write each time on the digital clock.

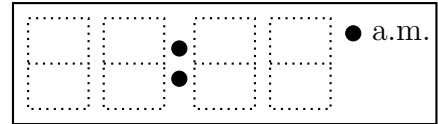
(a) "Five past eleven"



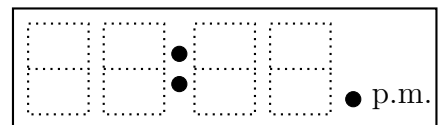
(b) "Twenty past six"



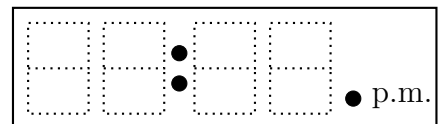
(c) "Ten past nine"



(d) "Five past three"

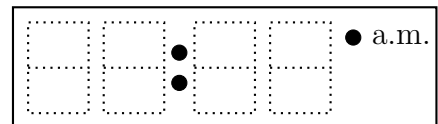


(e) "Twenty five past one"

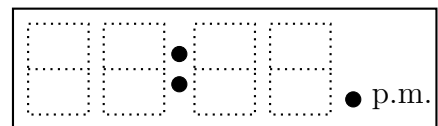


2. Write each time on the digital clock.

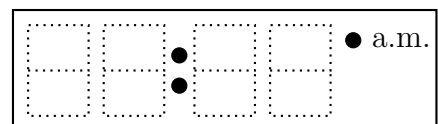
(a) "Five past eleven"



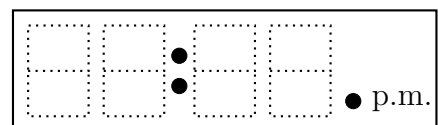
(b) "Twenty past six"



(c) "Ten past nine"



(d) "Five past three"



(e) "Twenty five past one"

