

1. Write the time shown on each clock face onto the digital clock below.

(a)

:

(b)

:

(c)

:

(d)

:

(e)

:

(f)

:

1. Write the time shown on each clock face onto the digital clock below.

(a)

:

(b)

:

(c)

:

(d)

:

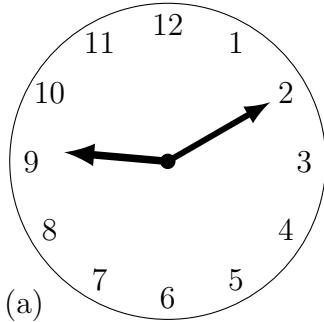
(e)

:

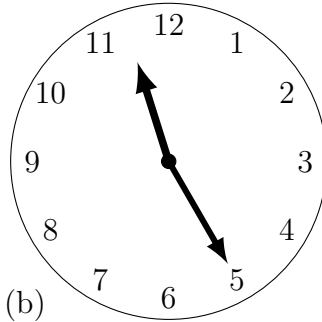
(f)

:

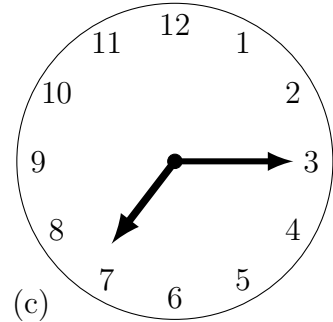
2. Write the time shown on each clock face onto the digital clock below.



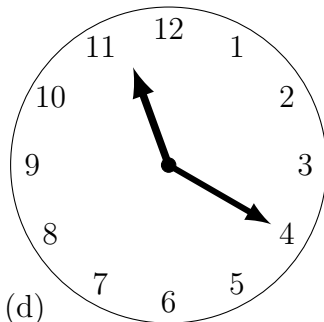
(a)



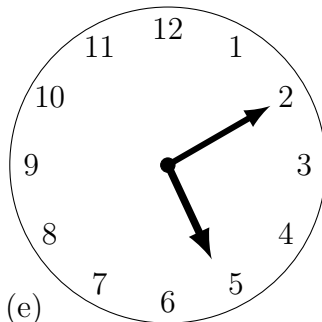
(b)



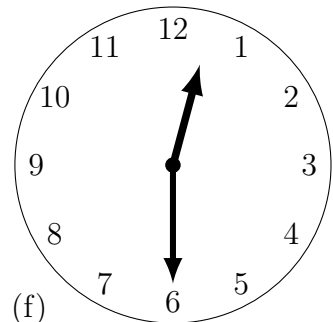
(c)



(d)

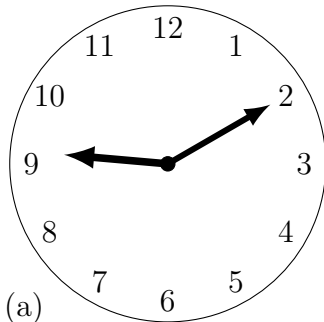


(e)

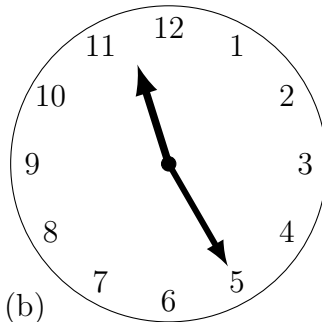


(f)

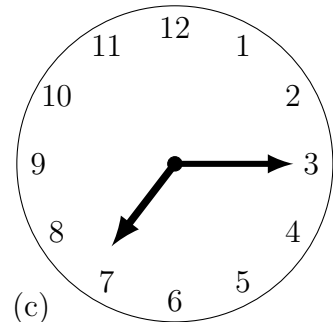
2. Write the time shown on each clock face onto the digital clock below.



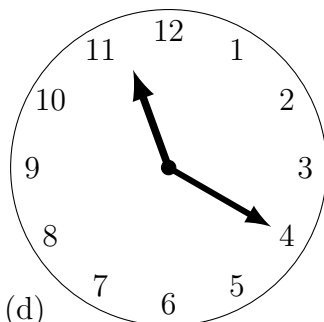
(a)



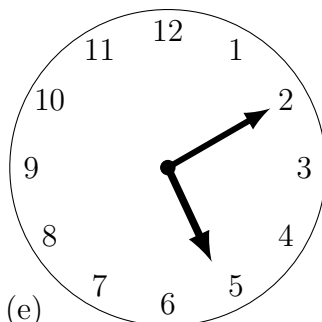
(b)



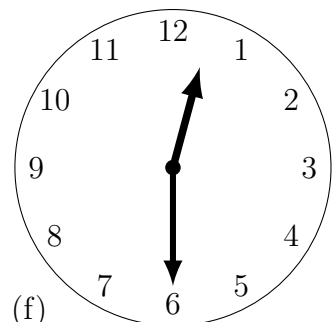
(c)



(d)



(e)



(f)