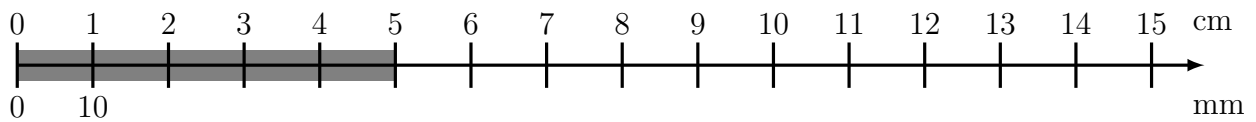


1. Here is an incomplete conversion stick measuring a thick grey line.

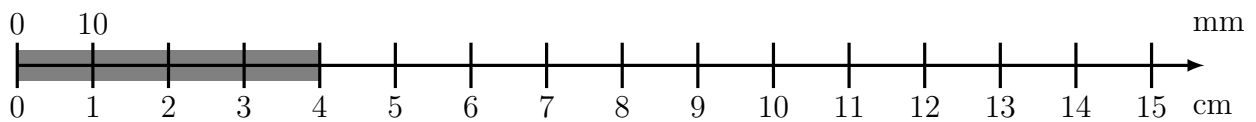


(i) Write down the length of the thick grey line in centimetres. cm

(ii) Write down the length of the thick grey line in millimetres. mm

(iii) Complete this fact: 13 cm = mm

2. Here is an incomplete conversion stick measuring a thick grey line.

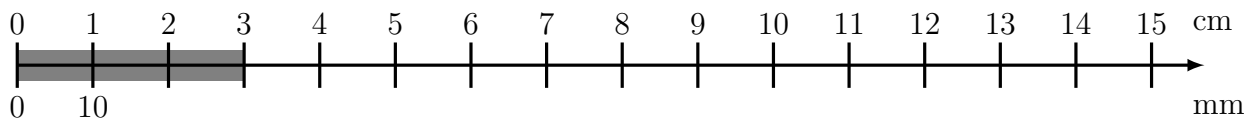


(i) Write down the length of the thick grey line in centimetres. cm

(ii) Write down the length of the thick grey line in millimetres. mm

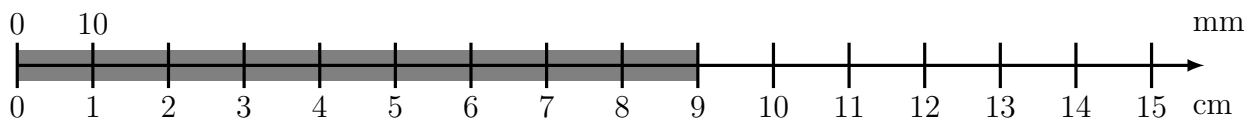
(iii) Complete this fact: 11 cm = mm

3. Here is an incomplete conversion stick measuring a thick grey line.



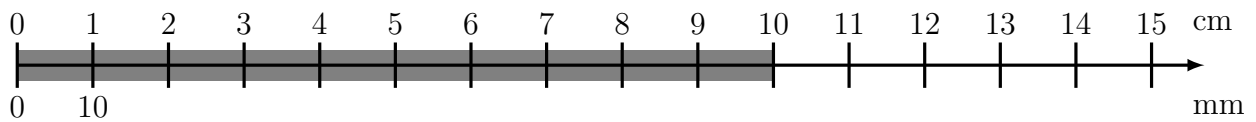
- (i) Write down the length of the thick grey line in centimetres. cm
- (ii) Write down the length of the thick grey line in millimetres. mm
- (iii) Complete this fact: 12 cm = mm

4. Here is an incomplete conversion stick.



- (i) Write down the length of the thick grey line in centimetres. cm
- (ii) Write down the length of the thick grey line in millimetres. mm
- (iii) Complete this fact: 15 cm = mm

5. Here is an incomplete conversion stick.



- (i) Write down the length of the thick grey line in centimetres. cm
- (ii) Write down the length of the thick grey line in millimetres. mm
- (iii) Complete this fact: 14 cm = mm

Answers

1. (i) 5, (ii) 50, (iii) 130
2. (i) 4, (ii) 40, (iii) 110
3. (i) 3, (ii) 30, (iii) 120
4. (i) 9, (ii) 90, (iii) 150
5. (i) 10, (ii) 100, (iii) 140