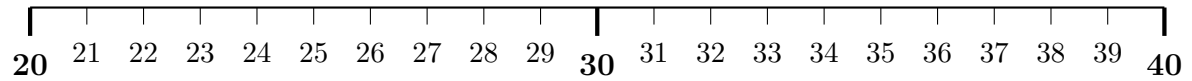


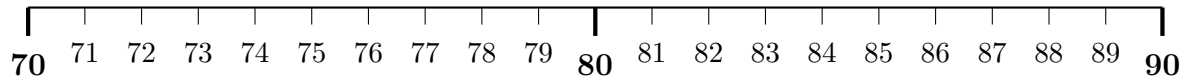
1. The diagram below shows part of a number line.



Circle the **five** twenty something numbers which equal 30, correct to the nearest 10

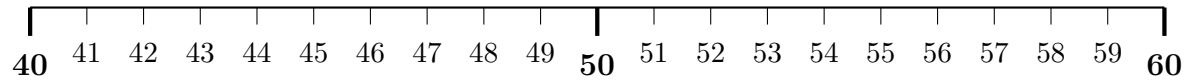
and circle the **five** thirty something numbers which equal 30, correct to the nearest 10.

2. The diagram below shows part of a number line.



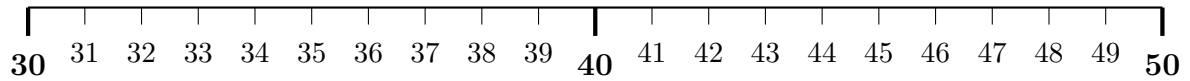
Circle the **five** seventy something numbers which equal 80, correct to the nearest 10
and circle the **five** eighty something numbers which equal 80, correct to the nearest 10.

3. The diagram below shows part of a number line.



Circle the **five** forty something numbers which equal 50, correct to the nearest 10
and circle the **five** fifty something numbers which equal 50, correct to the nearest 10.

4. The diagram below shows part of a number line.



Circle the **five** thirty something numbers which equal 40, correct to the nearest 10
and circle the **five** forty something numbers which equal 40, correct to the nearest 10.

Answers

1. 25 to 34
2. 75 to 84
3. 45 to 54
4. 35 to 44