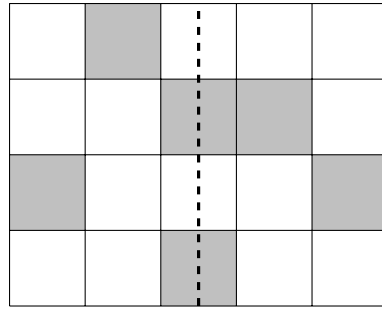
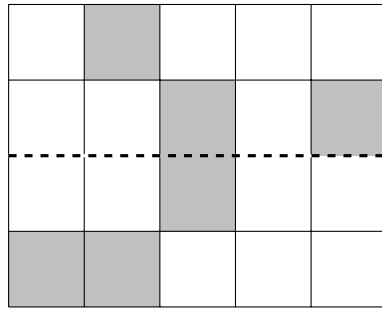



1. On the shape below, shade as few squares as possible so that so the dotted line is a line of symmetry.



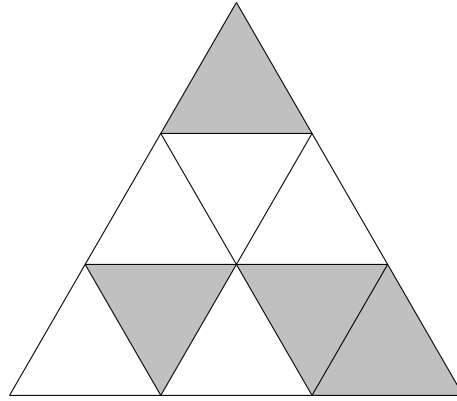
2. On the shape below, shade as few squares as possible so that so the dotted line is a line of symmetry.



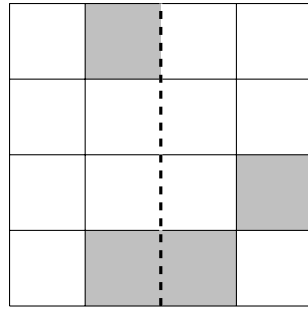
3. On the shape below, shade **two** squares so that the shape has 4 lines of symmetry.



4. On the shape below, shade as few triangles as possible to make a pattern with 3 lines of symmetry.



5. On the shape below, shade as few squares as possible so that so the dotted line is a line of symmetry.



Answers

1.

	X		B1	
	B1	X	X	
X				X
		X		

2.

B1	X			
		X		X
		X		B1
X	X			

3.

	X	B1	X	
X				X
X				X
X				X
	X	X	B1	

S

4. U B1 U

B1 S U S S

5.

	X	B1	
B1			X
	X	X	