

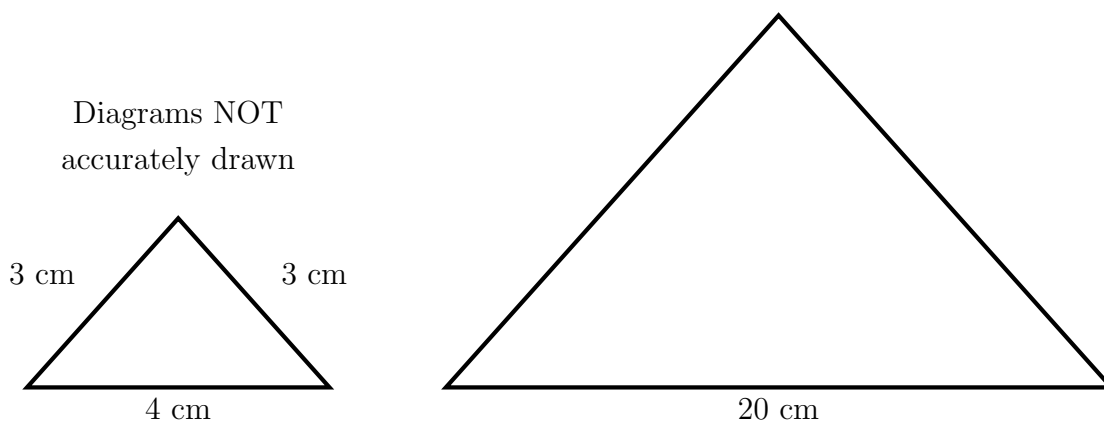
1. Here is the list of ingredients for making chickpea soup for 4 people.

Chickpea soup		
Ingredients for 4 people		
220	g	dried chickpeas
1		small red chilli
6		cloves of garlic
1	tbsp	coriander seeds
1	tbsp	cumin
1	tsp	tumeric
40	g	butter
200	ml	creme fraiche

Nzingha is going to make chickpea soup for 16 people.  
 Work out how many grams of chickpeas she should use.  
 You may use this proportional line.




2. Here are two similar isosceles triangles. {F.Y.I. the length of their sides are proportional, so they look the same as each other but as if they were further away or closer.}



Work out the lengths of the equal sides of the larger triangle.

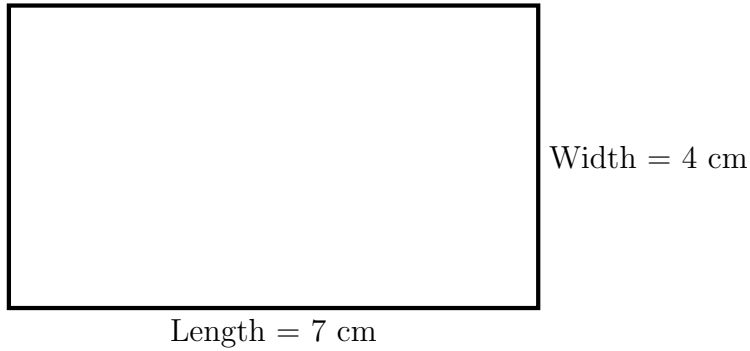
You may use this proportional line.




3. Complete:

$$\frac{7}{5} = \frac{\quad}{100} = \text{.....} \%$$

4. Here is a scale diagram of the Patio de los Leones in the Alhambra.



In this diagram, 1 cm represents 5 metres.



Complete this table.

	scale diagram	real life measurement
Length	7 cm	
Width	4 cm	20 m

## Answers

1. 880
2. 15
3. 140
4. 35m